

23/11/20

Watch the film clip here (<https://vimeo.com/467781234>) and answer the questions as you go through the lesson.

1)  $43 + 21 =$

2)  $46 + 13 =$

3)  $24 + 23 =$



4)  $52 + 16 =$



- 5) Andreea has 34 football cards.  
Josh has 15 more football cards than Andreea.  
How many football cards does Josh have?





6) Josh has 54 sweets.

Andreea has 21 more sweets than Josh.



How many sweets does Andreea have?



7) Find all the different possible answers.

	T	O	
		5	
+		2	
<hr/>			
	8	7	
<hr/>			


8) Find all the different possible answers.

	T	O	
		1	
+		4	
<hr/>			
	6	5	
<hr/>			

9) Work out the answer to each question and then insert the correct symbol.

< = >



$52 + 36 =$



$34 + 55 =$



$34 + 25 =$



$14 + 42 =$

