

24/11/20

Watch the film clip here (<https://vimeo.com/468518962>) and answer the questions as you go through the lesson.

1)  $38 + 9 =$

2)  $46 + 5 =$

3)  $27 + 7 =$



4)  $26 + 27 =$





5)  $45 + 28 =$



6) Find all the different possible answers.

	T	O	
		7	
+		4	
<hr/>			
	5	1	
<hr/>			
	1		

7) Find all the different possible answers.

	T	O	
		8	
+		7	
<hr/>			
	4	5	
<hr/>			
	1		