

25/11/20

Watch the film clip here (<https://vimeo.com/468561808>) and answer the questions as you go through the lesson.

1) $30 - 20 =$

2) There were 10 horses and 5 ran away. How many were left in the field?

3) $27 - 5 =$

4) $45 - 32 =$

5) $48 + 21 =$




$36 + 15 =$





6) Mo has 36 oranges.

Dora has 14 fewer oranges than Mo.



7) Find all the different possible answers.

	T	O	
		8	
+		7	
<hr/>			
	4	5	
<hr/>			
	1		