

26/11/20

Watch the film clip here (<https://vimeo.com/468562834>) and answer the questions as you go through the lesson.

1) $43 - 15 =$

$49 - 13 =$

2) $45 - 32 =$

$54 - 35 =$

3) $64 - 36 =$



$53 - 25 =$



4) $42 - 18 =$

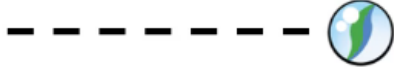


$74 - 29 =$

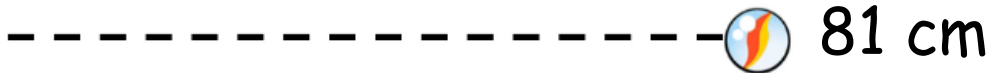


5)

How many more cm did Ron's marble roll?



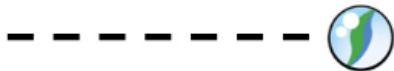
34 cm



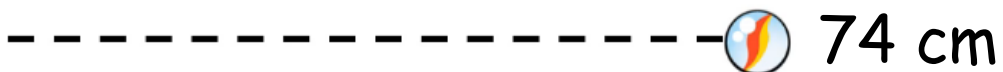
81 cm

6)

How many more cm did Ron's marble roll?



27 cm



74 cm