

PERIMETER SHEET 4A

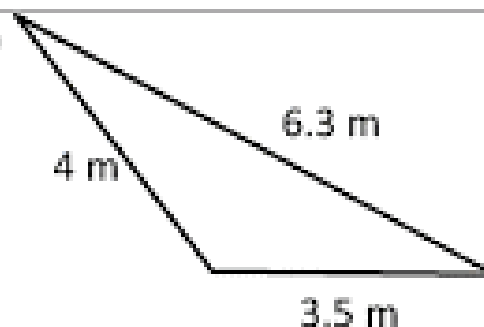


1)



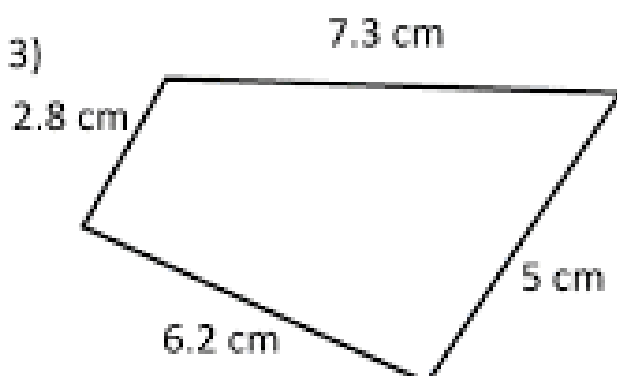
Perimeter = _____ cm

2)



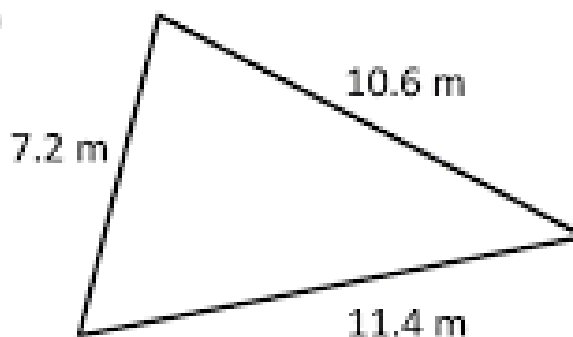
Perimeter = _____ m

3)



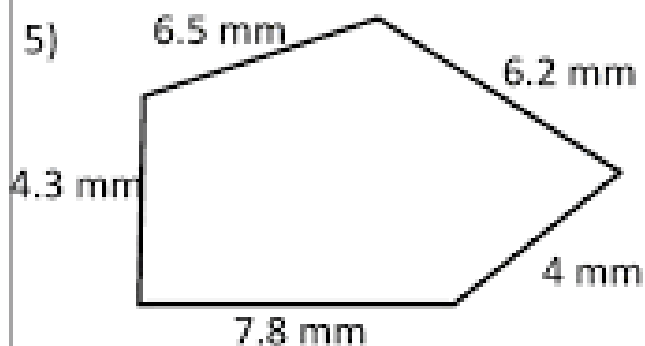
Perimeter = _____ cm

4)



Perimeter = _____ m

5)



Perimeter = _____ mm

6)




Perimeter = _____ cm

Quadrilateral-Perimeter

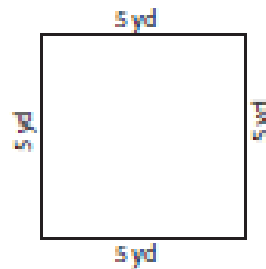
Find the perimeter of each quadrilateral.

1)



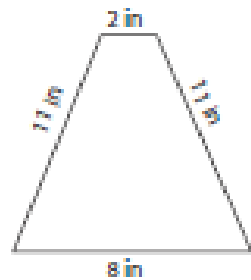
Perimeter = _____

2)



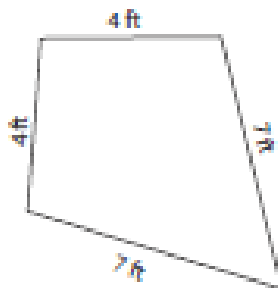
Perimeter = _____

3)



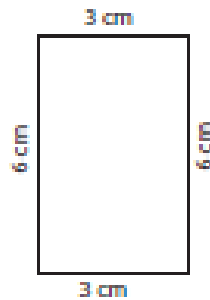
Perimeter = _____

4)



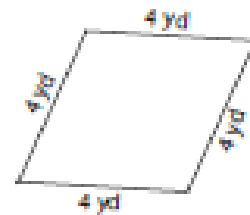
Perimeter = _____

5)



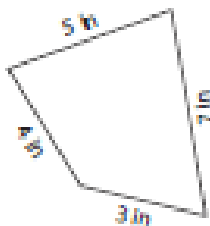
Perimeter = _____

6)



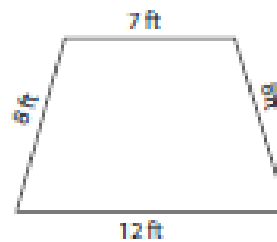
Perimeter = _____

7)



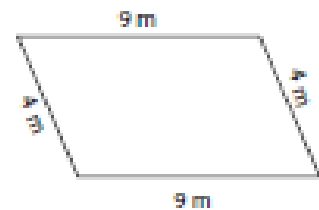
Perimeter = _____

8)



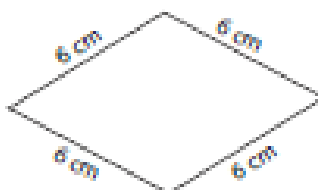
Perimeter = _____

9)



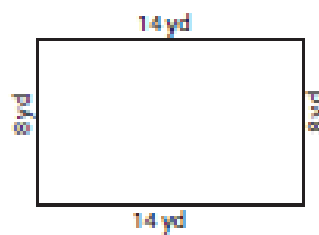
Perimeter = _____

10)



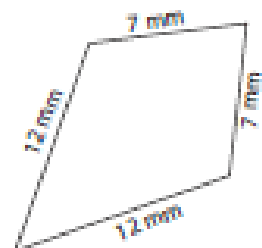
Perimeter = _____

11)



Perimeter = _____

12)



Perimeter = _____

PERIMETER SHEET 3



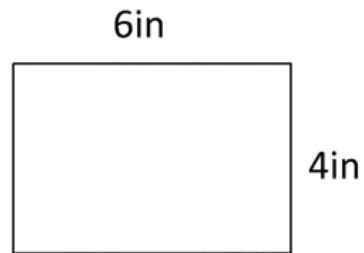
Work out the perimeter of the following rectangles. They are not to scale.

1)



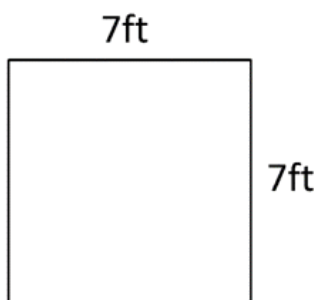
Perimeter = _____ cm

2)



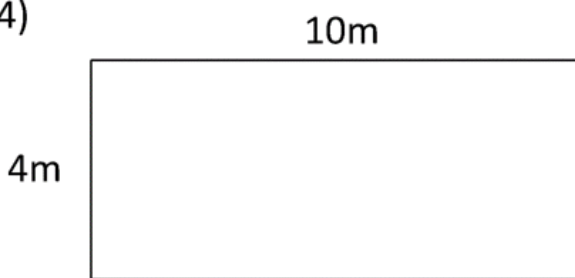
Perimeter = _____ in

3)



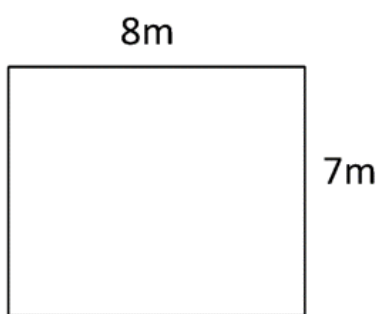
Perimeter = _____ ft

4)



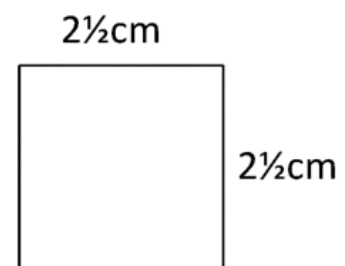
Perimeter = _____ m

5)



Perimeter = _____ m

6)



Perimeter = _____ cm