

**Remember:** there are two ways to divide.

Shared into 3 equal teams



Grouped into teams of 3



1

Circle groups of 4 flowers.




a) How many groups of 4 flowers did you make?

b) Complete the sentence.

There are  groups of 4 in 16

2

Eva makes an array with 32 counters.



a) How many groups of 4 are in the array?

b) Use this to complete the division sentence.

$$32 \div 4 = \square$$

3

Write in the missing numbers.

12, 16, 20, \_\_, \_\_, 32, 36

0, 4, 8, \_\_, \_\_, 20, 24

40, 36, \_\_, \_\_, 24, 20, 16

24, 20, \_\_, \_\_, 8, 4, 0

4

Use a number line to work out these divisions.

$$12 \div 4 =$$

---

$$20 \div 4 =$$

---



$$36 \div 4 =$$

---

5

Andreea has 20 sweets.

She shares them equally between her 4 friends.



How many sweets do they get each?

Each child gets  sweets.

6

Josh divides 12 counters into 4 groups.

Draw a picture to show what this looks like.

How many groups did you draw?