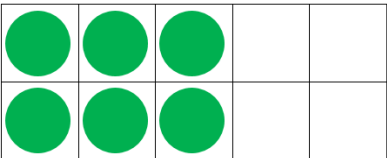
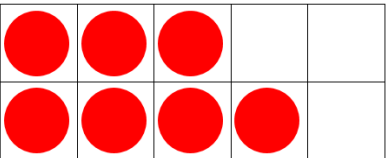


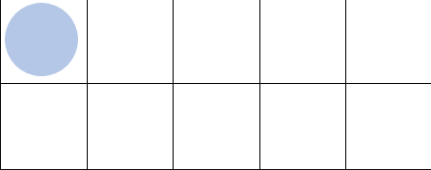
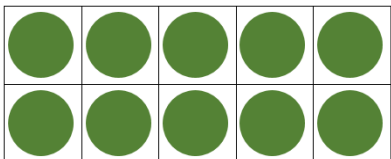
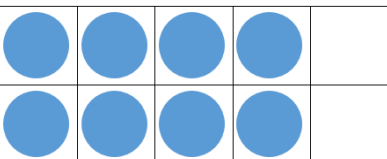




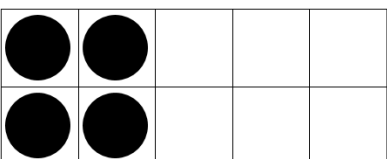
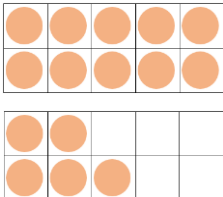
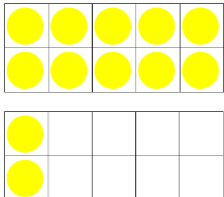
Odd and Even Numbers

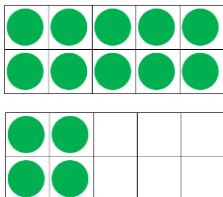
Odd or even? Use the ten frames to help you work it out!

 <p>6 is an even number.</p>	 <p> is an _____ number.</p>	 <p> is an _____ number.</p>
--	---	---


 <p> is an _____ number.</p>	 <p> is an _____ number.</p>	 <p> is an _____ number.</p>
---	--	---

 <p> is an _____ number.</p>	 <p> is an _____ number.</p>	 <p> is an _____ number.</p>
---	---	---

 <p> is an _____ number.</p>	 <p> is an _____ number.</p>	 <p> is an _____ number.</p>
---	---	---

 <p> is an _____ number.</p>	<p>Circle odd numbers red.</p> <table style="width: 100%; text-align: center;"> <tr> <td></td> <td>16</td> <td>29</td> <td></td> <td></td> </tr> <tr> <td>11</td> <td></td> <td>22</td> <td></td> <td></td> </tr> <tr> <td></td> <td>17</td> <td>28</td> <td></td> <td></td> </tr> </table>		16	29			11		22				17	28			<p>Circle even numbers green.</p> <table style="width: 100%; text-align: center;"> <tr> <td></td> <td>24</td> <td></td> <td>27</td> <td></td> </tr> <tr> <td></td> <td></td> <td>19</td> <td>20</td> <td></td> </tr> <tr> <td></td> <td>18</td> <td></td> <td></td> <td>26</td> </tr> </table>		24		27				19	20			18			26
	16	29																														
11		22																														
	17	28																														
	24		27																													
		19	20																													
	18			26																												

Odd and even party! Can you colour the *odd* numbers in green and the *even* numbers in yellow?



Can you put the numbers in order from **smallest** to **biggest**?

Odd							
Even							