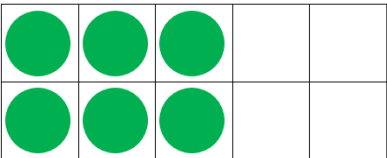
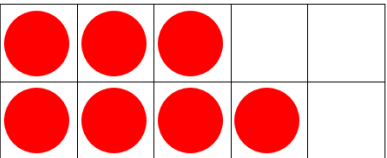


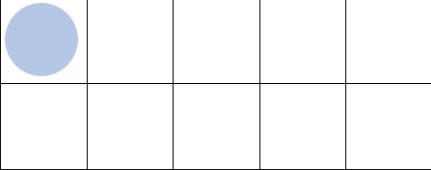
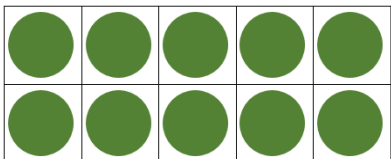
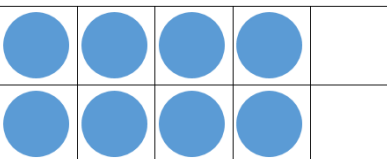




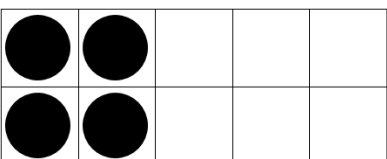
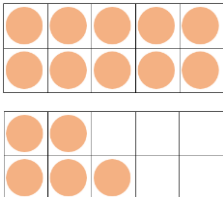
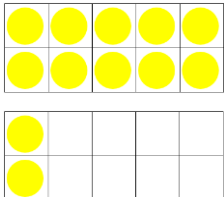
Odd and Even Numbers

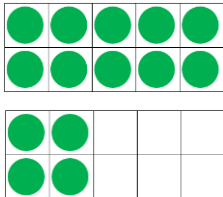
Odd or even? Use the ten frames to help you work it out!

 <p>6 is an even number.</p>	 <p> is an _____ number.</p>	 <p> is an _____ number.</p>
--	---	---

 <p> is an _____ number.</p>	 <p> is an _____ number.</p>	 <p> is an _____ number.</p>
---	--	---

 <p> is an _____ number.</p>	 <p> is an _____ number.</p>	 <p> is an _____ number.</p>
---	---	---

 <p> is an _____ number.</p>	 <p> is an _____ number.</p>	 <p> is an _____ number.</p>
---	---	---

 <p> is an _____ number.</p>	<p>Circle odd numbers red.</p> <table style="width: 100%; text-align: center;"> <tr> <td>11</td> <td>16</td> <td>17</td> <td>22</td> <td>28</td> <td>29</td> </tr> </table>	11	16	17	22	28	29	<p>Circle even numbers green.</p> <table style="width: 100%; text-align: center;"> <tr> <td>19</td> <td>20</td> <td>24</td> <td>26</td> <td>27</td> </tr> </table>	19	20	24	26	27
11	16	17	22	28	29								
19	20	24	26	27									

