

Remember: there are two ways to divide.

Shared into 3 equal teams



Grouped into teams of 3



1

Circle groups of 4 flowers.




a) How many groups of 4 flowers did you make?

b) Complete the sentence.

There are groups of 4 in 16

2

Eva makes an array with 32 counters.



a) How many groups of 4 are in the array?

b) Use this to complete the division sentence.

$$32 \div 4 = \square$$

3

Write in the missing numbers.

12, 16, 20, __, __, 32, 36

0, 4, 8, __, __, 20, 24

40, 36, __, __, 24, 20, 16

24, 20, __, __, 8, 4, 0

4

Use a number line to work out these divisions.

$$12 \div 4 =$$



$$20 \div 4 =$$

$$36 \div 4 =$$

5

Andrea has 20 sweets.

She shares them equally between her 4 friends.



How many sweets do they get each?

Each child gets sweets.

6

Kenzie divides 12 counters into 4 groups.

Draw a picture to show what this looks like.

How many groups did you draw?

7

$32 \div 4 = \square$

$4 \div 4 = \square$

$16 \div 4 = \square$

$40 \div 4 = \square$

$0 \div 4 = \square$

$8 \div 4 = \square$

$12 \div 4 = \square$

$24 \div 4 = \square$

$20 \div 4 = \square$

$28 \div 4 = \square$

$36 \div 4 = \square$

8

Keelan has 28 flowers to plant.
He puts 4 flowers in each pot.

How many pots will he need?