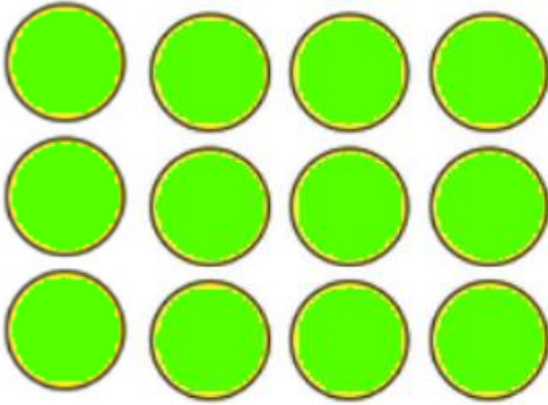


1




$$\square \times \square = \square$$

$$\square \times \square = \square$$

$$\square \div \square = \square$$

$$\square \div \square = \square$$

2



$$\square \times \square = \square$$





$$\square \times \square = \square$$

$$\square \div \square = \square$$

$$\square \div \square = \square$$

3

Complete these fact families.

Example:			
			
$2 \times 4 = 8$	$4 \times 2 = 8$		
$8 \div 4 = 2$	$8 \div 2 = 4$		
			

4

$4 \times 6 =$

$4 \times 6 =$

$4 \times 5 =$

$4 \times 9 =$

$4 \times 12 =$

$4 \times 4 =$

$4 \times 2 =$

$4 \times 10 =$

$4 \times 10 =$

$4 \times 0 =$

5

$28 \div 4 =$

$36 \div 4 =$

$32 \div 4 =$

$40 \div 4 =$

$12 \div 4 =$

$4 \div 4 =$

$36 \div 4 =$

$32 \div 4 =$

$16 \div 4 =$

$24 \div 4 =$