

1

Complete the sentences.

a)



There are equal groups of

$$\square + \square + \square + \square + \square + \square = \square$$

$$\square \times \square = \square$$

b)



$$\square \times \square = \square$$

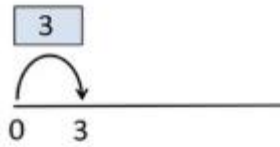
$$\square \times \square = \square$$

2 Complete.



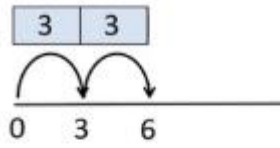
$$1 \times 3 = 3$$

$$3 \times 1 = 3$$



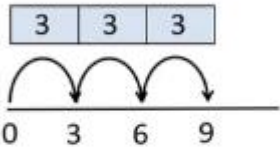
$$2 \times 3 = 6$$

$$3 \times 2 = 6$$



$$3 \times 3 = 9$$

$$3 \times 3 = 9$$




$$\times 3 =$$

$$\times 3 =$$



$$\times 3 =$$

$$\times 3 =$$



$$\times 3 =$$

$$\times 3 =$$



$$\times 3 =$$

$$\times 3 =$$



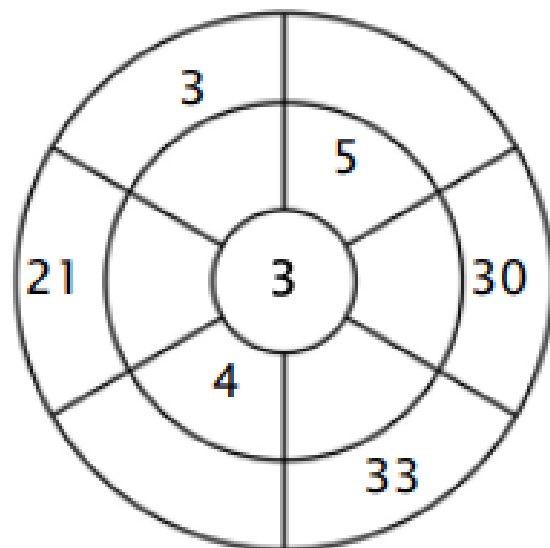
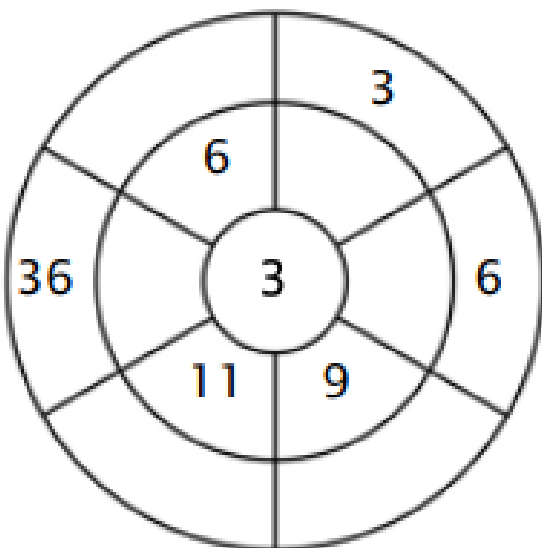
3

Colour in all the boxes that are multiples of three.

12	7	16	28	3
36	30	18	38	21
18	33	2	22	8
4	30	29	3	36
9	33	11	1	25

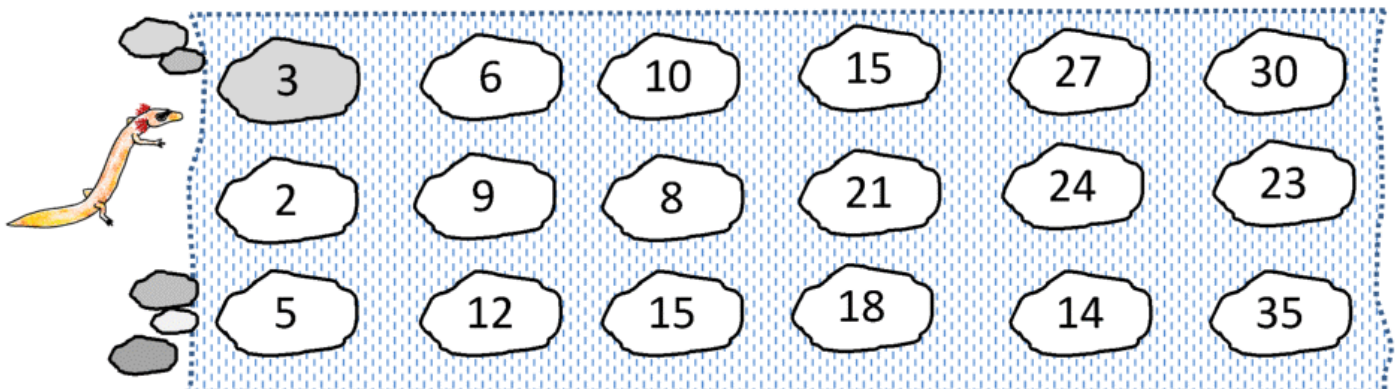
4

Complete the circle by multiplying the number in the centre by the middle ring to get the outer numbers.



5

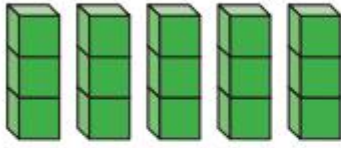
Help Captain Salamander to cross the river by shading the stepping stones counting up in 3s.



6

Which is the odd one out?

Tick your answer.



Explain your answer.

7

Draw lines to match the 3 times table fact to its answer.

3×4	15	3×8	6
3×1	9	3×7	30
3×5	12	3×2	24
3×3	3	3×9	21
3×6	18	3×10	27