


20/01/21

Remember: there are two ways to divide.

$$6 \div 3$$

Shared into 3 equal teams



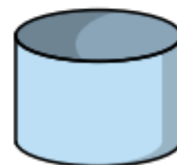
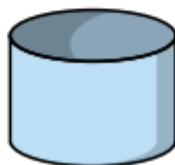
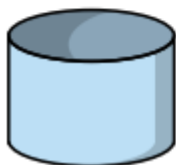
Grouped into teams of 3



1

Mo has 15 pencils.

He shares them equally into 3 pots.




How many pencils will there be in each pot?

There will be pencils in each pot.

2

Andrea has 21 sweets.

She shares them equally between her 3 friends.



How many sweets do they get each?

Each child gets sweets.

3

Keelan divides 12 counters into 3 groups.

Draw a picture to show what this looks like.

How many groups did you draw?

4

Josh has 27 flowers to plant.
He puts 3 flowers in each pot.

How many pots will he need?

5

There are 18 children in the hall.
Divide them into teams of three.

How many children are in each team?

6

There are 24 bricks.
How many towers of 3 can Kenzie make?

You do not need to complete question 7.