


Week 1 Addition and subtraction.

Tell someone at home any words or phrases that we might see when we are doing addition OR subtraction.



Lulu made 236 chocolate cookies
and 391 vanilla cookies.

How can we find the total number of
cookies?



$$236 + 391 =$$


What would be the best way to work this out?

Show your working out



$$236 + 391 =$$

Watch video clip "Explanation 1"



There were 658 children at a concert.
40 left the hall during the interval.
How many children remained in the
hall?



$$658 - 40 =$$


What would be the best way to work this out?

Show your working out




$$658 - 40 =$$

Watch video clip "Explanation 2"



$$627 - 30 =$$

Watch video clip "Explanation 3"



$$452 - 35 =$$

Watch video clip "Explanation 4"

