

Week 3 PLace Value



Count in 100's from 100-1000





100  
one hundred




200  
two hundred




300  
three hundred



400  
four hundred



500  
five hundred



600  
six hundred



700  
seven hundred



800  
eight hundred



900  
nine hundred



1000  
one thousand

How many hundreds  
make 1 thousand?



How many hundreds are there?  
Write this in numbers and words



Give  
it  
a  
go




How many hundreds are there?  
Write this in numbers and words



700  
seven hundred




How many hundreds are there?  
Write this in numbers and words



Give  
it  
a  
go



How many hundreds are there?  
Write this in numbers and words



1000  
one thousand




How many hundreds are there?  
Write this in numbers and words



Give  
it  
a  
go



How many hundreds are there?  
Write this in numbers and words



400  
four hundred

# Complete these questions

## Counting in Hundreds

1 Count and write in numbers.

(a)




hundreds = 400

(b)



hundreds =

(c)



hundreds =

Give  
it  
a  
go

1

## Counting in Hundreds, Tens and Ones

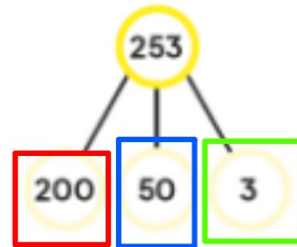

In Focus



How many beans are there altogether?



How many ● are there?



100, 200

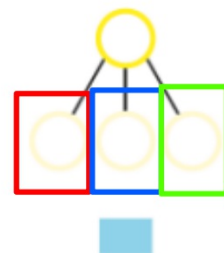
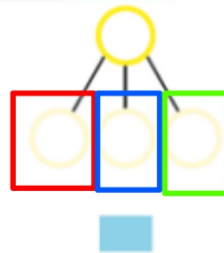

210, 220, 230, [ ] , [ ]

251, 252, [ ]



Give  
it  
a  
go

Count.  
Write in numbers and fill in the number bonds.




Give  
it  
a  
go

# Complete these questions


## Counting in Hundreds, Tens and Ones

1 Count and write in numbers.

(a)



(b)



(c)

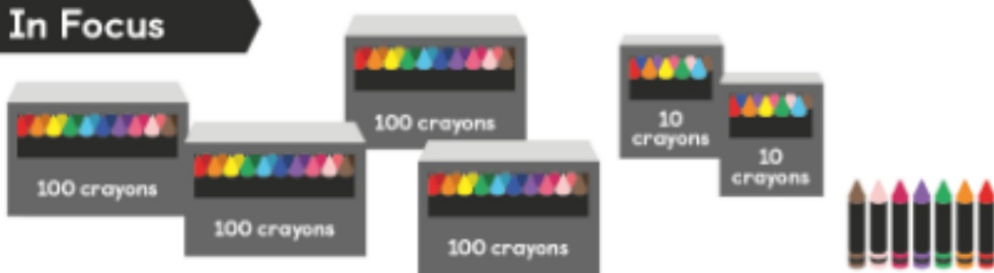


Give  
it  
a  
go




# Place Value

In Focus



There are 427 crayons.

What does the digit 4 in 427 stand for?



## Let's Learn

1



hundreds	tens	ones
4	2	7

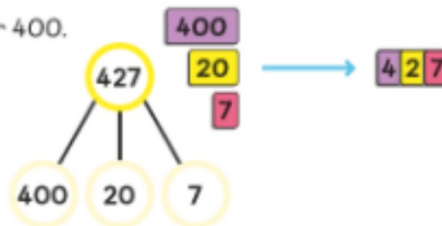
The digit 4 is in the hundreds place. Which digit is in the tens place and in the ones place?



$$427 = 4 \text{ hundreds} + 2 \text{ tens} + 7 \text{ ones}$$
$$427 = 400 + 20 + 7$$

The digit 4 stands for 4 hundreds or 400.  
The digit 2 stands for 2 tens or 20.  
The digit 7 stands for 7 ones or 7.

We write 427 as four hundred and twenty-seven.



2 What is the value of each digit in 530?

hundreds	tens	ones



530 =  hundreds +  tens +  ones

530 =  +  +

Give  
it  
a  
go



2 What is the value of each digit in 530?

hundreds	tens	ones
5	3	0



$$530 = 5 \text{ hundreds} + 3 \text{ tens} + 0 \text{ ones}$$

$$530 = 500 + 30 + 0$$

The value of the digit 5 is 500.

The value of the digit 3 is 30.

The value of the digit 0 is 0.



# Complete these questions

## Place Value

1 Count in hundreds, tens and ones. Fill in the blanks.

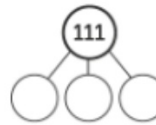
(a)



hundreds	tens	ones

$$111 = \square \text{ hundred } \square \text{ ten } \square \text{ one}$$

$$111 = \square + \square + \square$$



(b)



hundreds	tens	ones

$$234 = \square \text{ hundreds } \square \text{ tens } \square \text{ ones}$$

$$234 = \square + \square + \square$$



Give  
it  
a  
go

1

## Complete these questions

2 Fill in the blanks.

(a)

608

The digit  is in the tens place.

The digit  is in the hundreds place.

The digit  stands for 600.

The digit  stands for 8.

(b)

497

The digit 4 is in the  place.

The digit 9 is in the  place.

The digit 7 stands for .

The digit 4 stands for .

(c)

543

The digit  is in the tens place.

The digit  is in the hundreds place.

The digit  stands for 500.

The digit  stands for 3.

(d)

100

The digit 1 which is in the  place stands for .

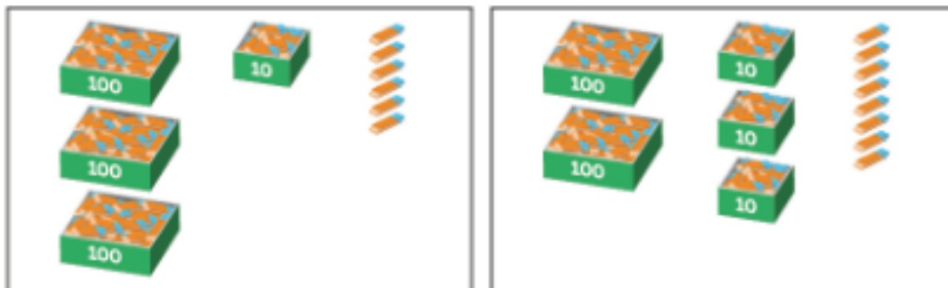
The two zeros are in the  and  places.

Give  
it  
a  
go



# Comparing and Ordering Numbers

## In Focus



Shop A


Shop B

Which shop has more rubbers? How do you know?

## Let's Learn

- 1 Which number is greater, 316 or 238?

Shop A



hundreds	tens	ones
3	1	6

Shop B



hundreds	tens	ones
2	3	8

3 hundreds is more than 2 hundreds.  
316 is more than 238.  
Shop A has more rubbers.




What should we compare first?

2 Which number is smaller, 835 or 826?



hundreds	tens	ones
8	3	5



hundreds	tens	ones
8	2	6

The digits in the hundreds place are the same. What should we compare next?



We compare the digits in the tens place.



2 tens is less than 3 tens.  
826 is less than 835.

Do you know how to compare 472 and 479? Which is greater?



**We would need to look at the ones column.**



1 Compare the numbers.



78

is less than



87



is more than



2 Arrange the numbers in order.

(a) Start with the greatest.

74, 47, 77  
□, □, □

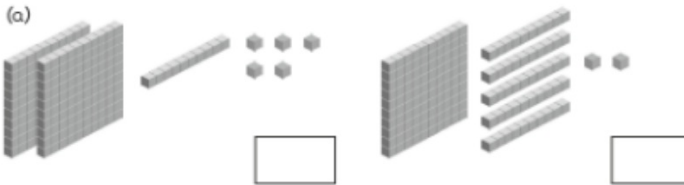
(b) Start with the smallest.

128, 124, 182  
□, □, □

Give  
it  
a  
go

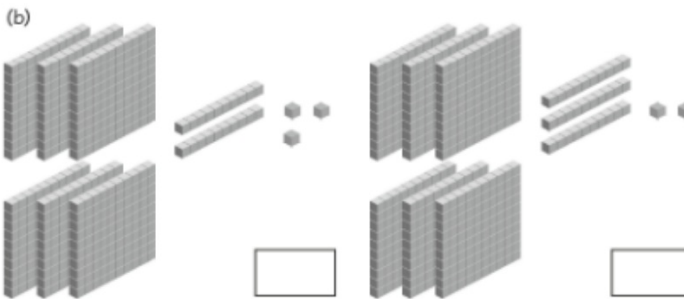
## Complete these questions

1 Compare the numbers and fill in the blanks.



is more than .

is less than .



is more than .

is less than .

Give  
it  
a  
go