





Division Detectives: 3x table


Can you use your 3x table facts to help Mike the Maths Detective track down the missing facts in these division number sentences?


1.  $\div 3 = 1$


3. $9 \div 3 =$ 


8. $21 \div 3 =$ 


2. $30 \div 3 =$ 


4. $18 \div 3 =$ 


9.  $\div 3 = 12$


5.  $\div 3 = 4$

10. $0 \div 3 =$ 

6.  $\div 3 = 2$

11.  $\div 3 = 5$


7. $24 \div 3 =$ 


12. $27 \div 3 =$ 





Division Detectives: 3x table


Can you use your 3x table facts to help Mike the Maths Detective track down the missing facts in these division number sentences?


13. $6 \div 3 =$ 


15.  $\div 3 = 8$


20.  $\div 3 = 9$


14. $30 \div 3 =$ 


16.  $\div 3 = 3$


21. $21 \div 3 =$ 


17.  $\div 3 = 1$

22.  $\div 3 = 5$

18. $18 \div 3 =$ 

23. $33 \div 3 =$ 

19.  $\div 3 = 4$

24.  $\div 3 = 12$



Division Detectives: 3x table **Answers**

Question	Answer
1.	$3 \div 3 = 1$
2.	$30 \div 3 = 10$
3.	$9 \div 3 = 3$
4.	$18 \div 3 = 6$
5.	$12 \div 3 = 4$
6.	$6 \div 3 = 2$
7.	$24 \div 3 = 8$
8.	$21 \div 3 = 7$
9.	$36 \div 3 = 12$
10.	$0 \div 3 = 0$
11.	$15 \div 3 = 5$
12.	$27 \div 3 = 9$

Question	Answer
13.	$6 \div 3 = 2$
14.	$30 \div 3 = 10$
15.	$24 \div 3 = 8$
16.	$9 \div 3 = 3$
17.	$3 \div 3 = 1$
18.	$18 \div 3 = 6$
19.	$12 \div 3 = 4$
20.	$27 \div 3 = 9$
21.	$21 \div 3 = 7$
22.	$15 \div 3 = 5$
23.	$33 \div 3 = 11$
24.	$36 \div 3 = 12$