


Complete the worksheet.

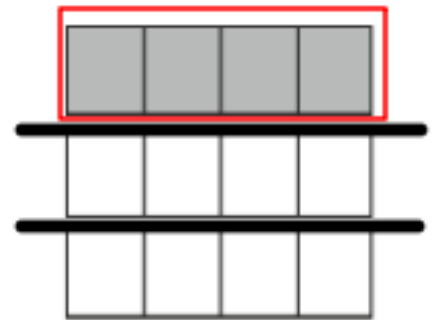
Remember! Look at how many new parts have been made.


Finding the Simplest Fraction

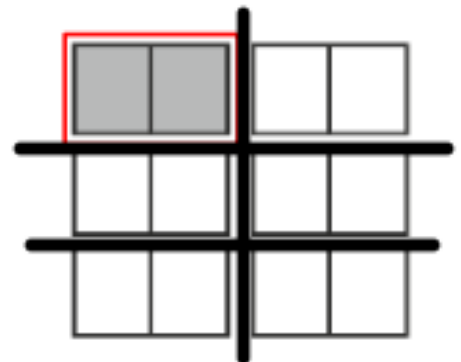
A cake is divided into 12 pieces.


Find the fraction of the cake each person takes.

(a)  I took 4 pieces.

$$\frac{4}{12} = \boxed{\quad}$$


(b)  I took 2 pieces.

$$\frac{2}{12} = \boxed{\quad}$$


(c)  I took 3 pieces.

$$\frac{3}{12} = \boxed{\quad}$$
