

Complete the worksheet.

**Remember!** Use your counters to help you find your groups.

## Finding Part of a Set

Fill in the blanks.


**1** Circle the apples to make 3 groups.



What is  $\frac{1}{3}$  of 9 apples?

apples


**2** Circle the oranges to make 5 groups.



What is  $\frac{1}{5}$  of 20 oranges?

oranges


3 Circle the marbles to make 4 groups.



What is  $\frac{1}{4}$  of 12 marbles?

marbles


4 Circle the balls to make 2 groups.




What is  $\frac{1}{2}$  of 16 balls?

balls

3 Answer the following questions.

Draw  in the bars to help you.

Use  to stand for doughnuts, pears and sweets.




(a) What is  $\frac{1}{2}$  of 12 doughnuts?




 doughnuts

(b) What is  $\frac{1}{5}$  of 25 pears?



 pears

(c) What is  $\frac{1}{4}$  of 20 sweets?



 sweets