

Complete the worksheets.

Remember! The squares are to write fractions or numbers and the circles are to write symbols for you calculations (+ or – or =). The rectangles above the bar models are for numbers. You should show your working out. This will really help you.

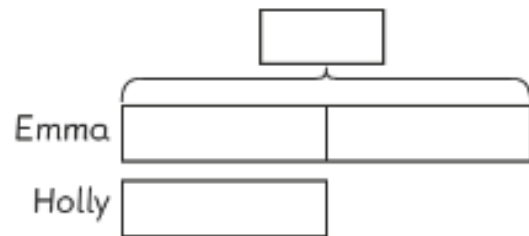
Solving Word Problems

Solve and fill in the blanks.

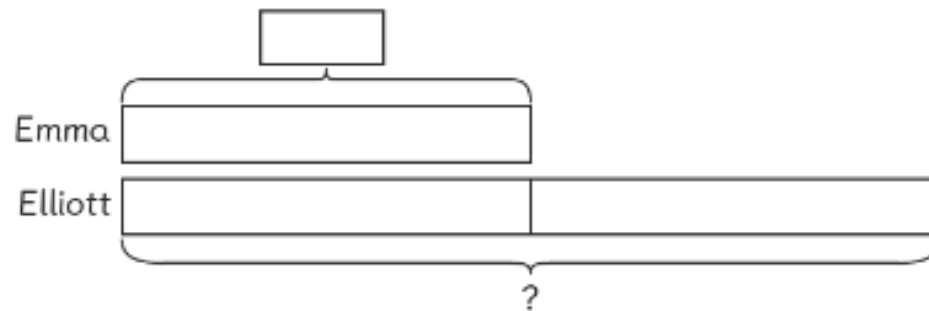
1 Elliott bought twice as many marbles as Emma bought.

Holly bought $\frac{1}{2}$ as many marbles as Emma bought.

Emma bought 10 marbles. How many marbles did they buy altogether?



Holly → of



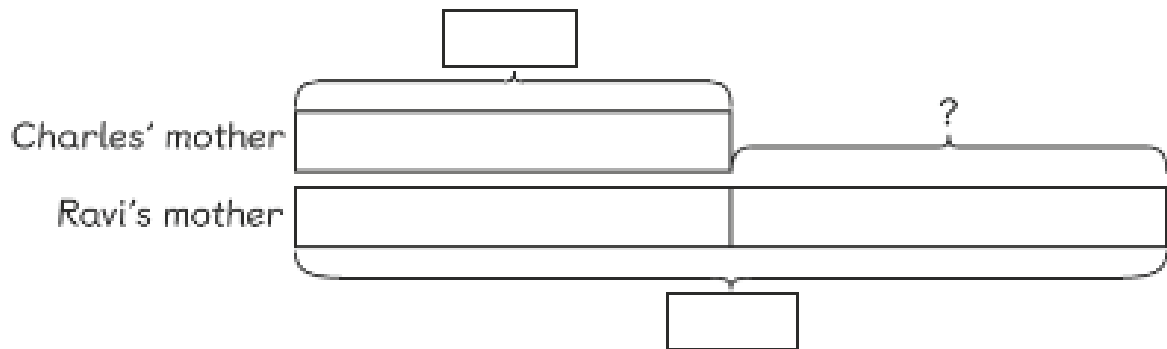
Elliott →

Total →

They bought marbles altogether.

- 2 Ravi's mother bought 34 apples. Charles' mother bought $\frac{1}{2}$ as many apples as Ravi's mother bought.

How many more apples did Ravi's mother buy?



Difference \rightarrow of

Ravi's mother bought more apples than Charles' mother bought.

- 3 Lulu had $\frac{1}{2}$ as many 20p coins as Amira. Amira had thirty 20p coins.

How many 20p coins did they have altogether?

Lulu \rightarrow of

Total \rightarrow

They had 20p coins altogether.