
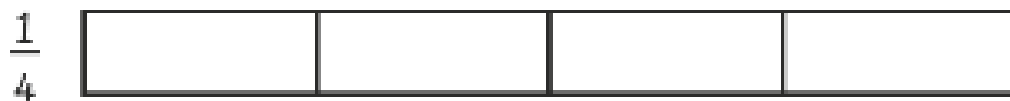
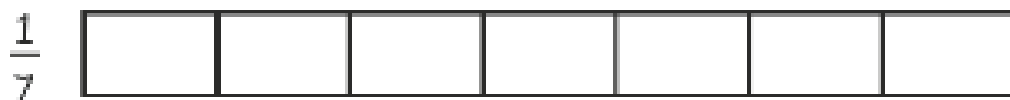
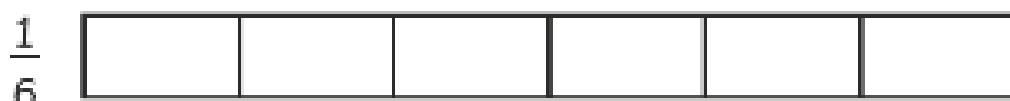


Guided Practice

1 Which number is greater?



2 Which number is smaller?

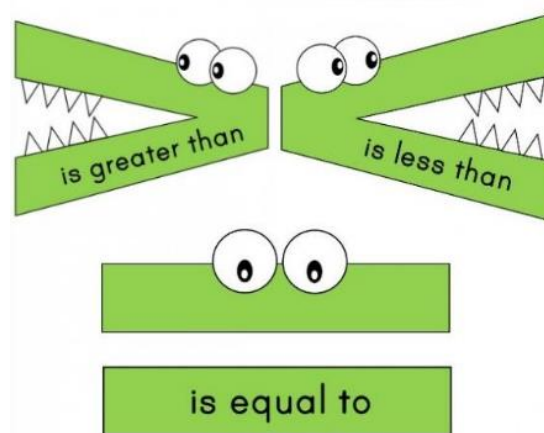


3 Compare using =, < or >.

(a) $\frac{1}{2}$  $\frac{1}{10}$

(b) $\frac{1}{2}$  $\frac{1}{3}$

(c) $\frac{1}{10}$  $\frac{1}{3}$



Draw bar models to help you if you need to.