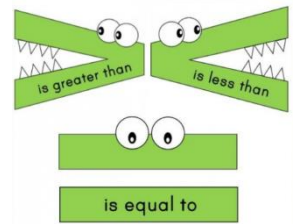
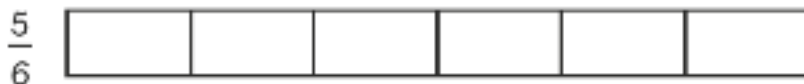


Draw bar models to help you if you need to.

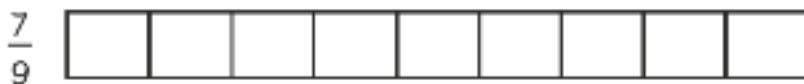
### Guided Practice



1 Which number is greater?



2 Which number is smaller?



3 Compare using =, < or >.

(a)  $\frac{2}{7}$   $\frac{5}{7}$

(b)  $\frac{4}{5}$   $\frac{3}{5}$

(c)  $\frac{8}{11}$   $\frac{7}{11}$

(d)  $\frac{2}{7}$   $\frac{7}{2}$

---