
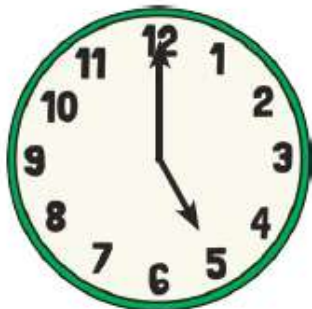


Analogue Time – O'clock Answers



2 o'clock



5 o'clock




10 o'clock



8 o'clock



12 o'clock



3 o'clock

Write the time shown on each clock.



3 o'clock



4 o'clock



6 o'clock
