

2 Write the amount of money shown.







Example 	10 pence
	2 pounds
	5 pence
	20 pence
	50 pence
	1 pound

3

Count.

Complete the table.



picture	amount	number of coins	picture	amount	number of coins
	1 pence	3		10 pence	3
	2 pence	4		20 pence	3
	5 pence	5		1 pound	2