

Practice Questions Answers:

(a) $15 - 7 =$ 8



$10 - 7 =$ 3

3 + 5 = 8

(b) $13 - 5 =$ 8

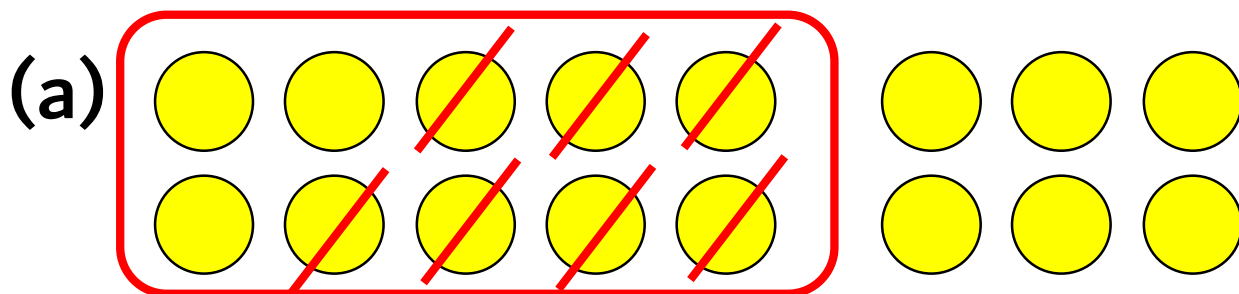


$10 - 5 =$ 5

5 + 3 = 8

Worksheet Answers:

Use the space next to each question to write out the parts like we did with the practice questions.

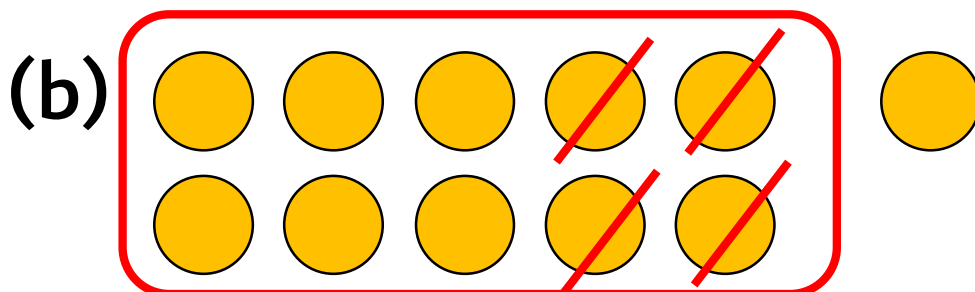


$$16 - 7 =$$

9

$$10 - 7 = 3$$

$$3 + 6 = 9$$



$$11 - 4 =$$

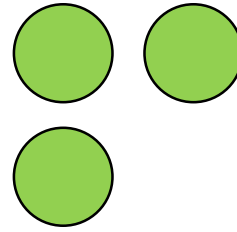
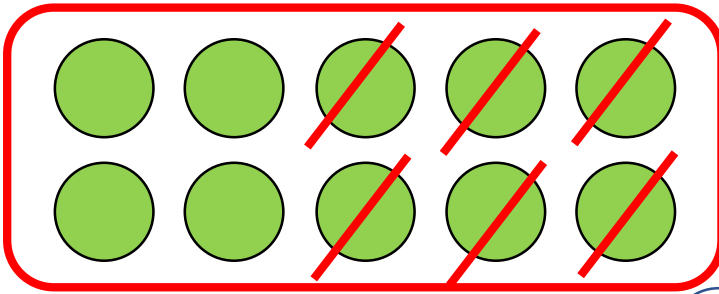
7

$$10 - 4 = 6$$

$$6 + 1 = 7$$

Use the space next to each question to write out the parts like we did with the practice questions.

(c)



$$13 - 6 =$$


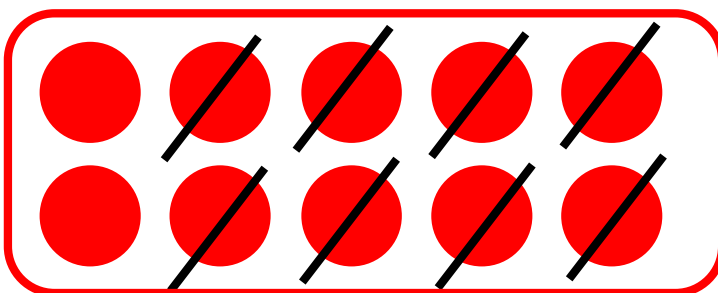
7

$$10 - 6 = 4$$

$$4 + 3 = 7$$

For the last question, you'll need to **draw the counters yourself** and follow the same steps as before.

(d)



$$14 - 8 =$$

6

$$10 - 8 = 2$$

$$2 + 4 = 6$$