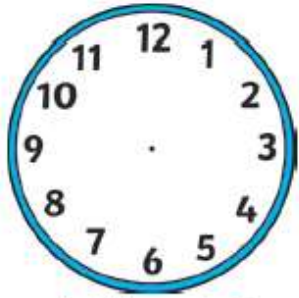


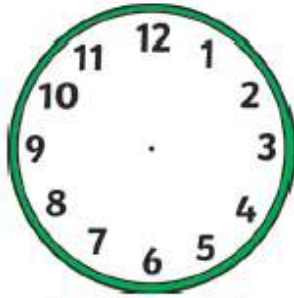
Analogue Time – Half Past

What's the time?

Draw hands on the clocks to show the time. Remember to draw a short hand to show hours and a long hand to show minutes. Try to point the hands as accurately as you can.



half past 2



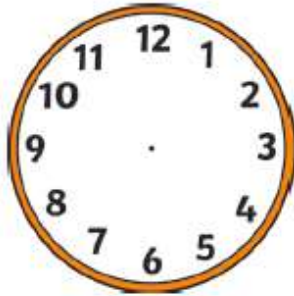
half past 5




half past 10



half past 8



half past 12



half past 3

Write the time shown on each clock.

