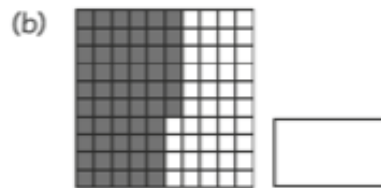
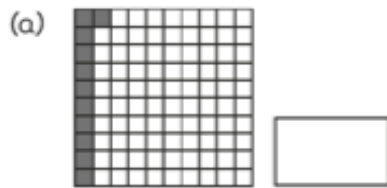
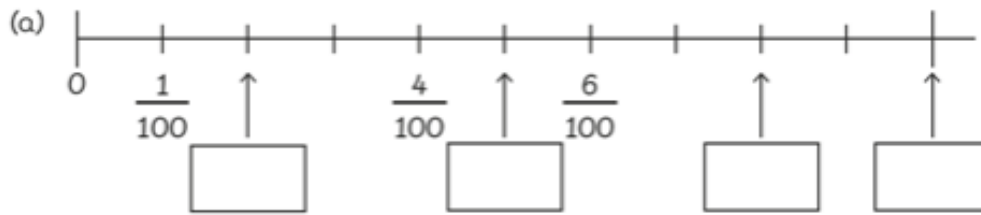


Counting in Hundredths

1 What fraction of the block is shaded?



2 Fill in the blanks.



(b) , $\frac{19}{100}$, $\frac{20}{100}$, $\frac{21}{100}$, , $\frac{23}{100}$, $\frac{24}{100}$,

(c) $\frac{89}{100}$, , $\frac{85}{100}$, $\frac{83}{100}$, , $\frac{79}{100}$, , $\frac{75}{100}$