


Answer the following questions.

Draw  in the bars to help you.

Use  to stand for doughnuts, pears and sweets.



- (a) What is $\frac{1}{2}$ of 12 doughnuts?



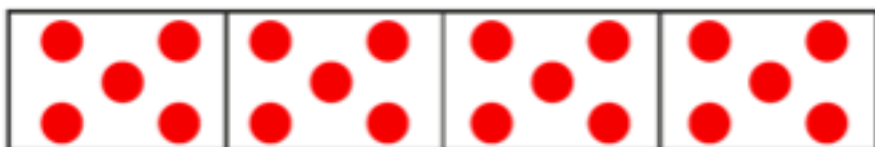
doughnuts

- (b) What is $\frac{1}{5}$ of 25 pears?



pears


- (c) What is $\frac{1}{4}$ of 20 sweets?




sweets

Finding Part of a Set


1 Fill in the blanks.

Draw  in the bars to help you.

Use  to stand for cherries and buttons.




(a) What is $\frac{1}{4}$ of 16 cherries?



$\frac{1}{4}$ of 16 cherries is cherries.

(b) What is $\frac{3}{4}$ of 20 buttons?



$\frac{3}{4}$ of 20 buttons is buttons.

2 Fill in the blanks.

(a) What is $\frac{1}{6}$ of 24 pens?

$\frac{1}{6}$ of 24 pens is pens.

(b) What is $\frac{5}{6}$ of 24 pens?

$\frac{5}{6}$ of 24 pens is pens.