

Counting and Writing Numbers to 40

Draw the right number of
tens and ones

Example: 22






34

27

31

Write the numbers shown




Counting and Writing Numbers to 40

Draw the right number of
tens and ones

Example: 22 

34 

27 

31 

Write the numbers shown