




Complete the worksheets

Comparing Angles

- 1** Each figure below is made up of two lines.
Circle the figures that make an acute angle.



2 Mark all the acute angles in the shapes below and then write down how many you found.

