







The pupils at Monster High need to line up in height order for their class photo. Put the heights in order. If you need help use a number line.

					
1.1m	2.1m	1.8m	0.9m	0.6m	1.6m

Complete the statements by writing $<$ or $>$ in each box.

$0.6\text{m} \square 1.1\text{m}$

$1.1\text{m} \square 0.9\text{m}$

$1.8\text{m} \square 0.6\text{m}$

$2.1\text{m} \square 1.8\text{m}$

$1.6\text{m} \square 2.1\text{m}$

$0.9\text{m} \square 1.6\text{m}$

