
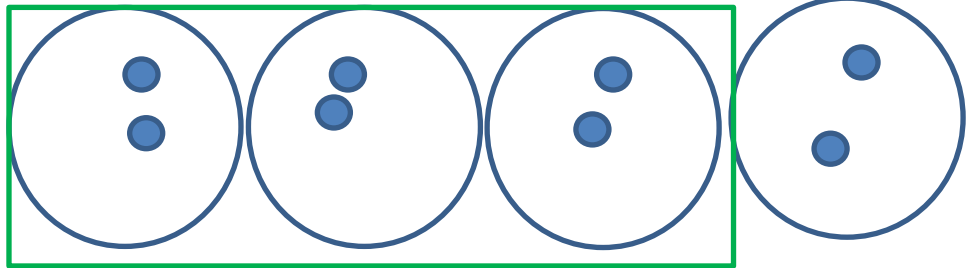


08.02.21 Finding $\frac{3}{4}$

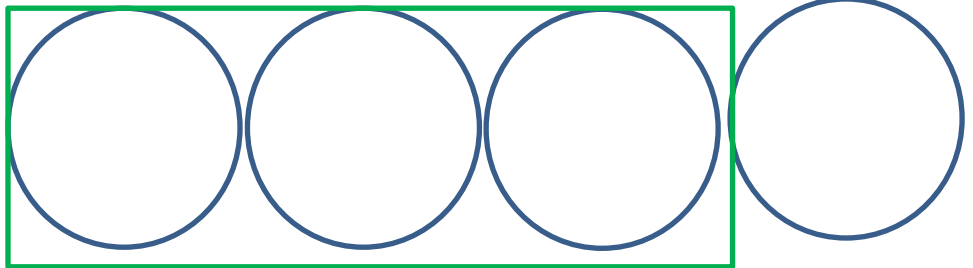


Find $\frac{3}{4}$ of the following numbers. Share dots between the four parts to find $\frac{1}{4}$, then look at the 3 parts within the rectangle to work out $\frac{3}{4}$ s. The dots have been shared in the first one for you.

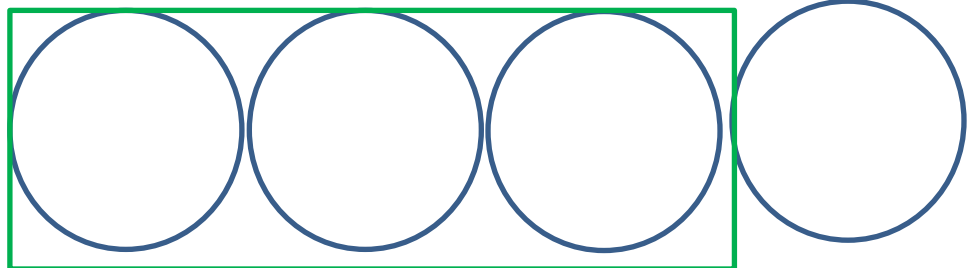
$$\frac{3}{4} \text{ of } 8 = \underline{\quad}$$



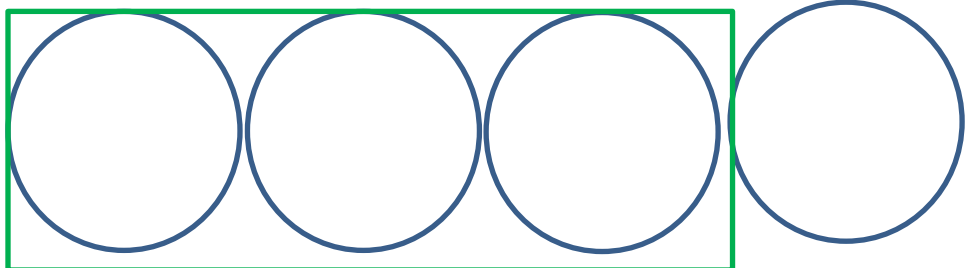
$$\frac{3}{4} \text{ of } 12 = \underline{\quad}$$



$$\frac{3}{4} \text{ of } 16 = \underline{\quad}$$



$$\frac{3}{4} \text{ of } 20 = \underline{\quad}$$



Answers

1. 6

2. 9

3. 12

4. 15