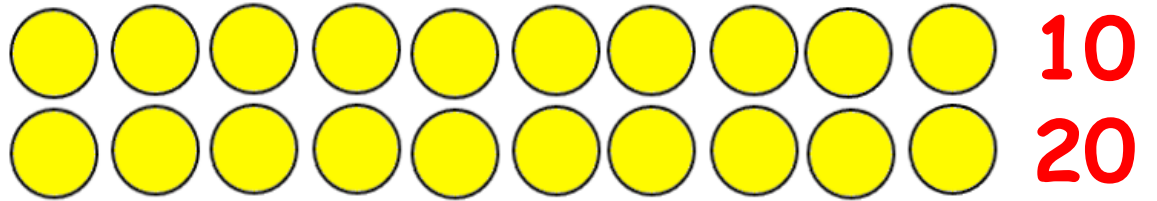



Count in your 2s, 5s or 10s to find the answers:

a) 2 rows of 10 = **20**



b) 3 rows of 5 = **15**




c) 4 rows of 2 = **8**



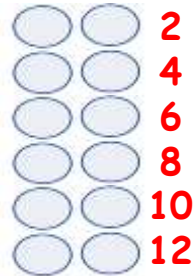
For this part of our work you will need to use your workbook.

Draw the following arrays and count in your 2s, 5s or 10s to find the answers:

a) 4 rows of 5 = **20**



b) 6 rows of 2 = **12**



c) 3 rows of 10 = **30**

