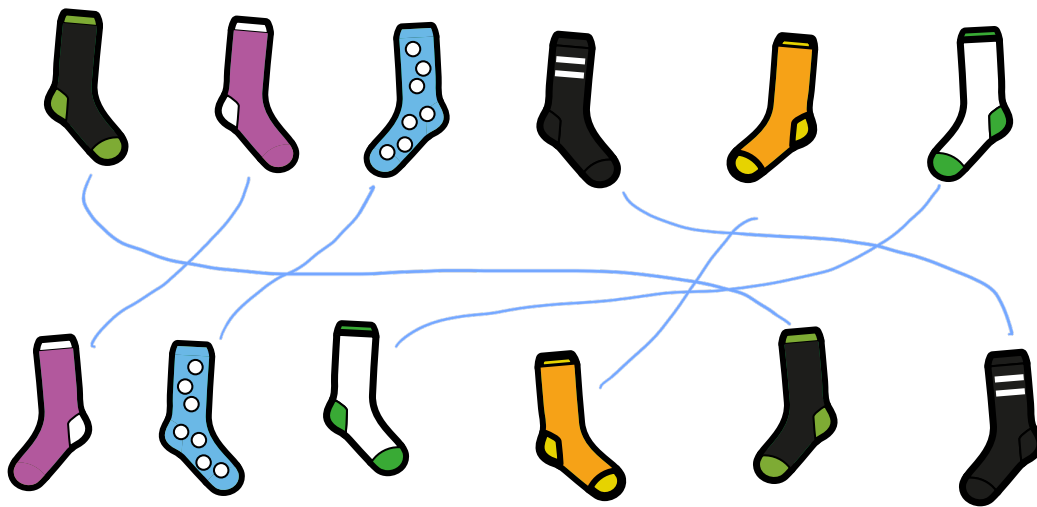


# Make equal groups – grouping

I Here are some socks.



a) Draw lines to match the pairs of socks.

b) Complete the sentences.

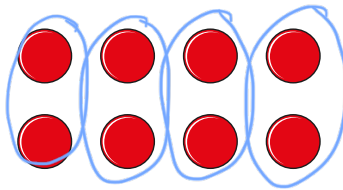
There are  socks altogether.

There are  socks in each pair.

There are  pairs of socks.



2 Here are some counters.



a) Circle groups of 2

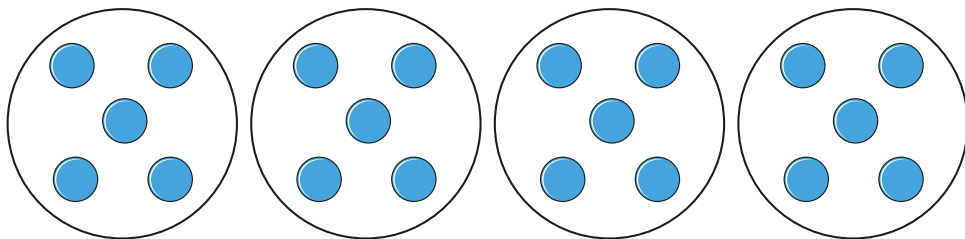
b) Complete the sentences.

There are  counters altogether.

There are  equal groups of 2 counters.

3 Complete the sentences.

a)

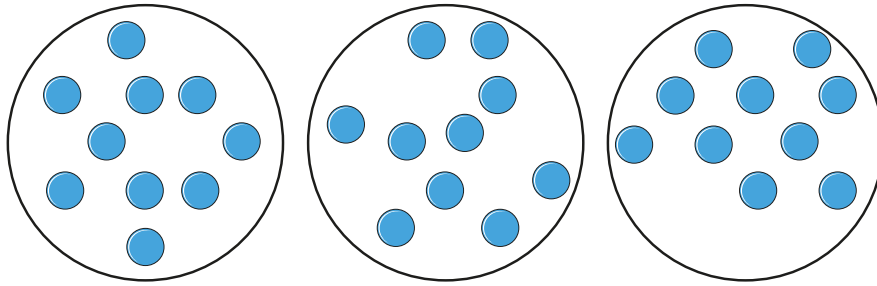


There are  counters altogether.

There are  equal groups of  counters.



b)



There are  counters altogether.

There are  equal groups of  counters.

**4** Use 10 counters.

a) How many equal groups of 2 can you make?

b) How many equal groups of 5 can you make?

c) How many equal groups of 10 can you make?

Talk about your answers.

