







The pupils in Class 3 at Monster High are all different heights.

<input type="text"/>	<input type="text"/>	<input type="text"/>	<input type="text"/>	<input type="text"/>	<input type="text"/>
					
1.1m	2.1m	1.9m	0.9m	0.6m	1.6m

Complete the statements by writing < or > in each box.

0.6m 1.1m

1.1m 0.9m

1.9m 0.6m

2.1m 1.9m

1.6m 2.1m

0.9m 1.6m

Use the clues to work out who's who and write the correct name of each monster in the boxes above.

Think about which clues are the most useful starting points.

- Blob is shorter than Grin.
- Grin's height has a 6 in the tenths column.
- Bugz is the tallest.
- Grue is taller than Grin.
- Warp is exactly 1m shorter than Bugz.
- Fuzz is shorter than everyone.