

Name: \_\_\_\_\_ Class: \_\_\_\_\_ Date: \_\_\_\_\_

## Worksheet 15

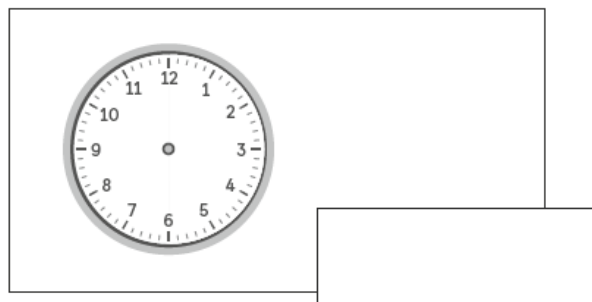
### Measuring Time in Minutes

Complete the clocks and fill in the blanks.

(a)



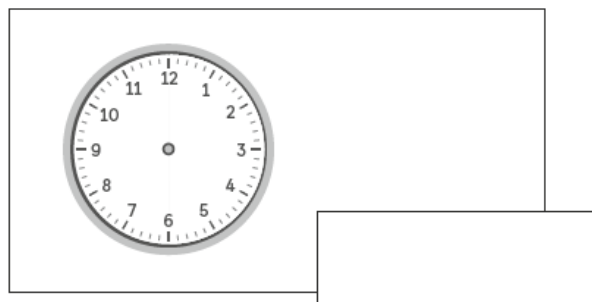
→  
10 min



(b)



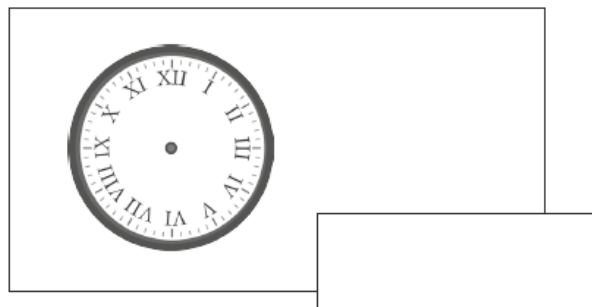
→  
50 min



(c)



→  
40 min



(d)



→  
25 min

