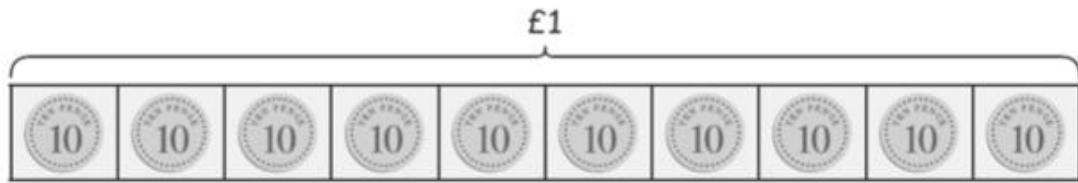







Writing Amounts of Money

1



Write the amount of money in £.

- (a)  £
- (b)  £
- (c)  £
- (d)  £
- (e)  £

You might have different answers to the ones below – as long as yours add up to the correct amount, they're correct!

2 Circle the coins which make up the correct amount. **Answers may vary.**

(a)  £0.60

(b)  £0.90

(c)  £1.30

(d)  £2.70

(e)  £4.20