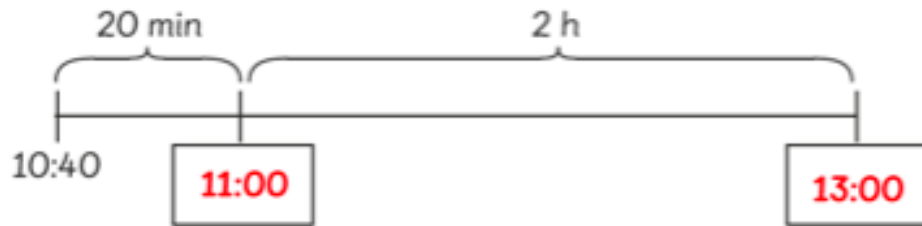


Solving Problems on Duration of Time

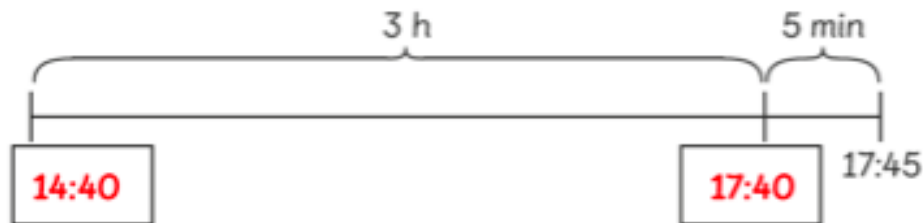
Solve.

- 1 A bus takes 2 h 20 min to travel from Town A to Town B.
The bus left Town A at 10:40.
At what time will the bus arrive at Town B?



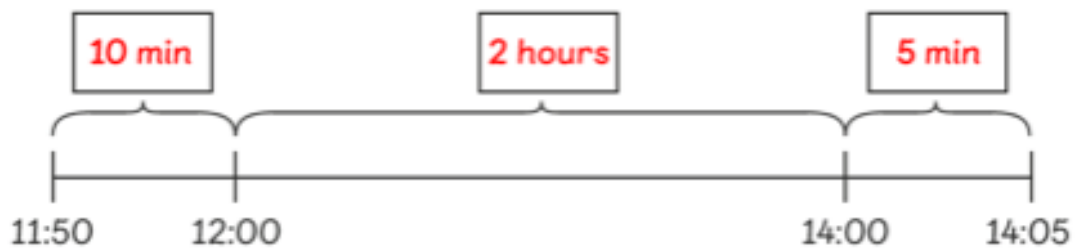
The bus will arrive at Town B at .

- 2 The same bus takes 3 h 5 min to return to Town A from Town B.
The bus reached Town A at 17:45.
At what time did the bus leave from Town B?



The bus left Town B at .

- 3 Ruby arrived at the library at 11:50.
She left the library at 14:05.
How long did she spend at the library?



She spent **2 h 15 m** at the library.

- 4 Charles watched a late night show that began at 23:15 on Saturday.
The show lasted for 2 h 30 min.
When did the show end?



The show ended at **01:45** on **Sunday**.