

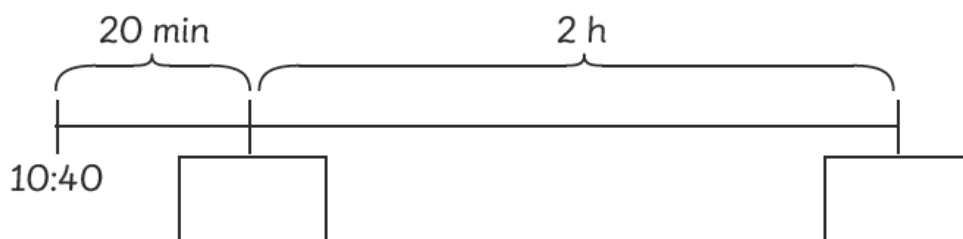
Name: \_\_\_\_\_ Class: \_\_\_\_\_ Date: \_\_\_\_\_

## Worksheet 4

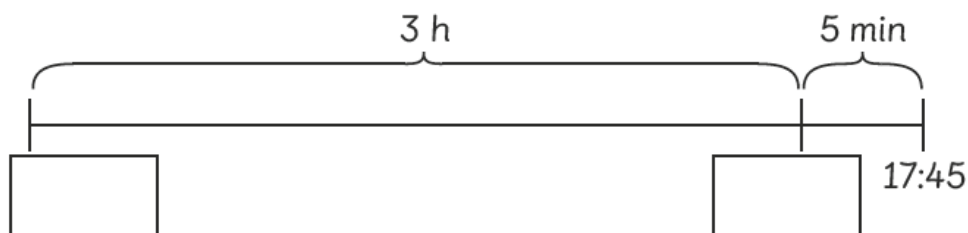
### Solving Problems on Duration of Time

Solve.

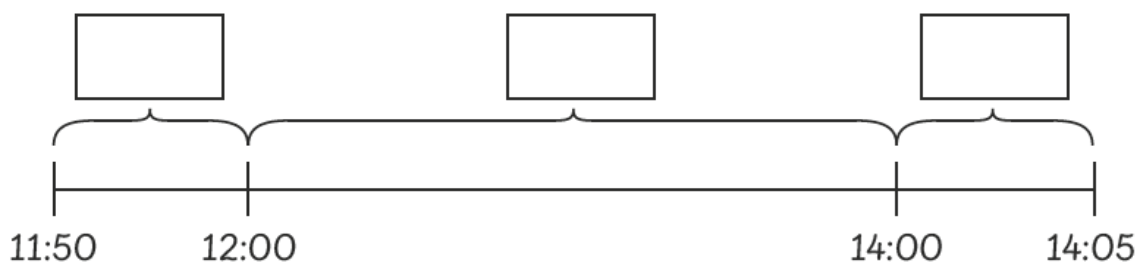
- 1** A bus takes 2 h 20 min to travel from Town A to Town B.  
The bus left Town A at 10:40.  
At what time will the bus arrive at Town B?

The bus will arrive at Town B at .

- 2** The same bus takes 3 h 5 min to return to Town A from Town B.  
The bus reached Town A at 17:45.  
At what time did the bus leave from Town B?

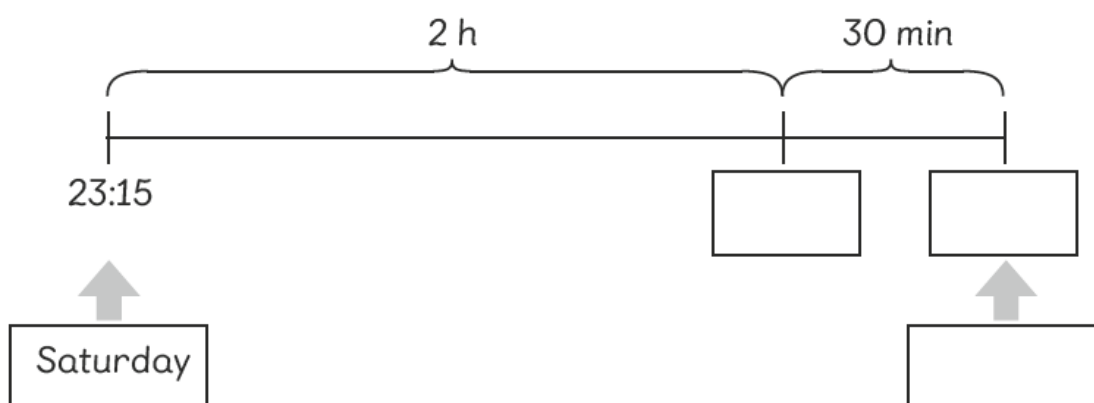
The bus left Town B at .

- 3 Ruby arrived at the library at 11:50.  
She left the library at 14:05.  
How long did she spend at the library?



She spent  at the library.

- 4 Charles watched a late night show that began at 23:15 on Saturday.  
The show lasted for 2 h 30 min.  
When did the show end?



The show ended at  on .