

Name: \_\_\_\_\_ Class: \_\_\_\_\_ Date: \_\_\_\_\_

## Worksheet 2

### Writing Amounts of Money

1 Write the amount of money in £.


£ £ £ £ 

2 Match.




£0.48 ●

● £1 and 35p



£1.35 ●

● £2 and 9p



£2.09 ●

● 48p

**3** Circle the coins which make up the correct amount.


(a)




(b)



(c)



(d)



(e)

