

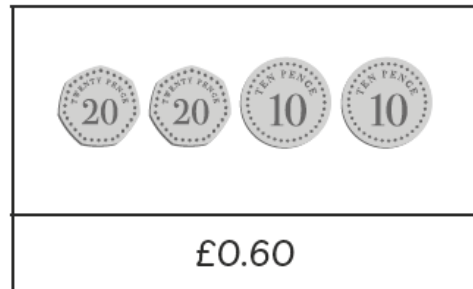
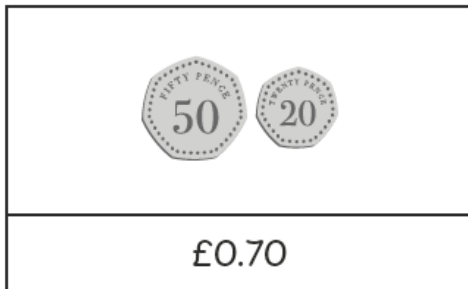
Name: \_\_\_\_\_ Class: \_\_\_\_\_ Date: \_\_\_\_\_

## Worksheet 3

### Comparing Amounts of Money


1 Write each amount of money in £, then compare the two amounts.

(a)



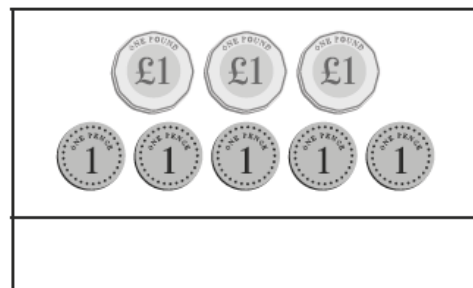

£  is more than £ .

(b)



£  is less than £ .

(c)



£  is more than £ .