

Name: _____ Class: _____ Date: _____

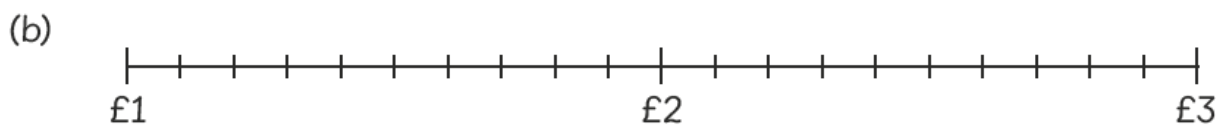
Worksheet 4

Rounding Amounts of Money


1 Round each amount to the nearest £.




$$\text{£}1.60 \approx \boxed{}$$



$$\text{£}2.45 \approx \boxed{}$$




$$\text{£}3.80 \approx \boxed{}$$




$$\text{£}4.50 \approx \boxed{}$$

2 Round the price of each item to the nearest £ and to the nearest £10.

(a)  £15.80 \approx (to the nearest £)
 £15.80 \approx (to the nearest £10)

(b)  £23.25 \approx (to the nearest £)
 £23.25 \approx (to the nearest £10)

(c)  £37.90 \approx (to the nearest £)
 £37.90 \approx (to the nearest £10)

3 Complete the table.

	Round to the nearest £	Round to the nearest £10
£9.11		
£12.64		
£15.43		
£28.50		