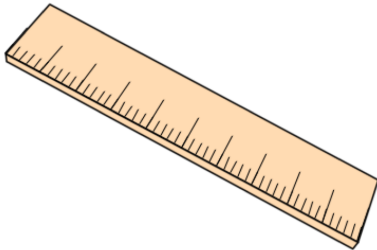


## Primary Practice Questions



Corbettmaths



# Percentages of Amounts



### Tips

- Read each question carefully
- Attempt every question.
- Check your answers seem right.
- Always show your workings

### Recap

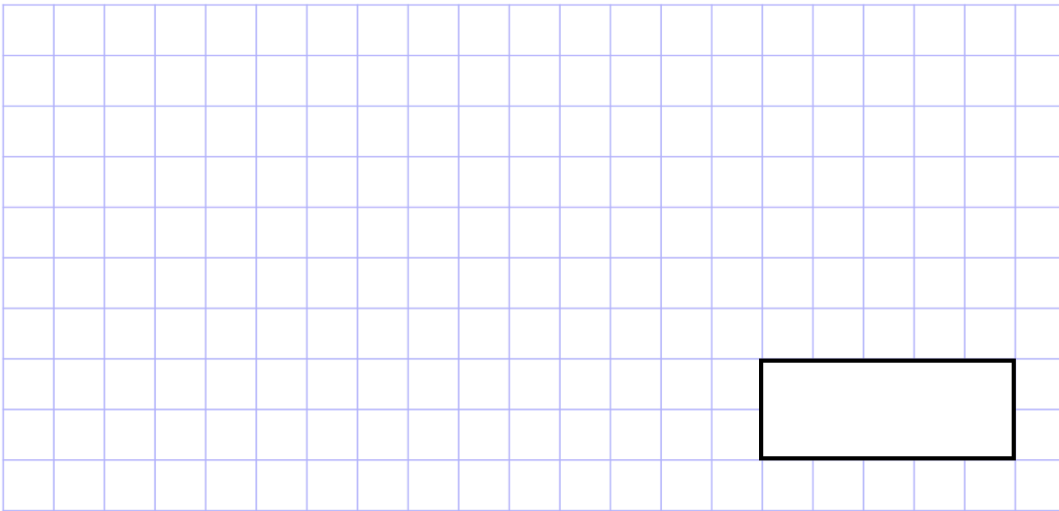


### Remember

- There are daily questions found at  
[www.corbettmathsprimary.com/5-a-day/](http://www.corbettmathsprimary.com/5-a-day/)

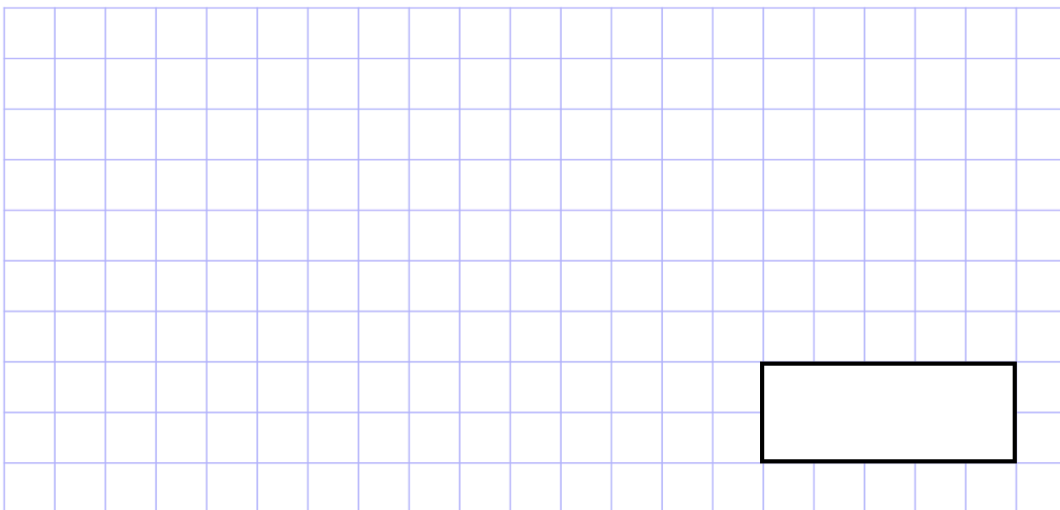
1.

50% of 32



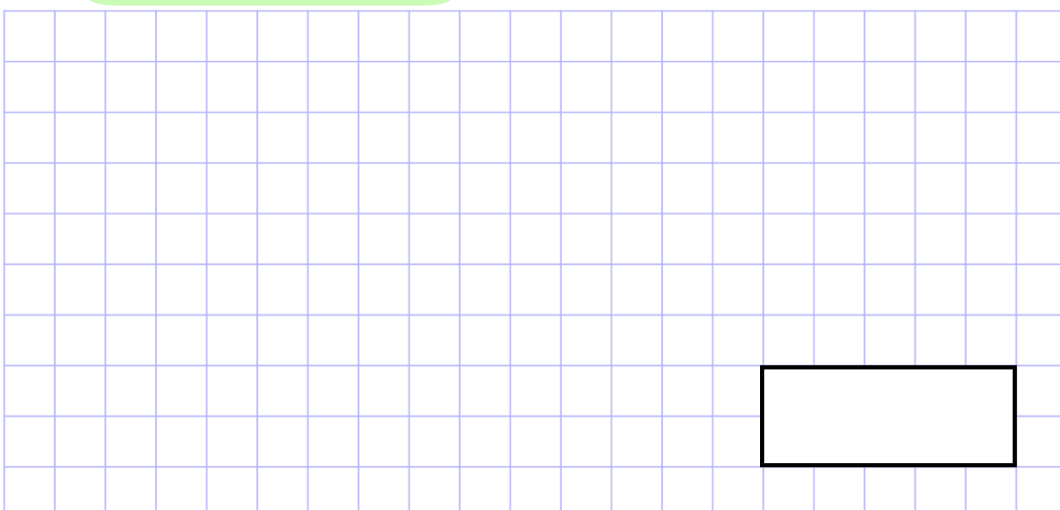
2.

25% of 12



3.

10% of 60



4.

50% of 17

A 20x10 grid with a rectangular box for the answer, located in the bottom right corner of the grid.

5.

25% of 600

A 20x10 grid with a rectangular box for the answer, located in the bottom right corner of the grid.

6.

75% of 48

A 20x10 grid with a rectangular box for the answer, located in the bottom right corner of the grid.

7.

10% of 800

A 20x10 grid with a rectangular box in the bottom right corner, spanning 5 units wide and 2 units high.

8.

1% of 700

A 20x10 grid with a rectangular box in the bottom right corner, spanning 5 units wide and 2 units high.

9.

20% of 30

A 20x10 grid with a rectangular box in the bottom right corner, spanning 5 units wide and 2 units high.

10.

30% of 70

A 20x10 grid with a rectangular box for the answer, spanning 5 units wide and 2 units high, located in the bottom right corner.

11.

5% of 9,000

A 20x10 grid with a rectangular box for the answer, spanning 5 units wide and 2 units high, located in the bottom right corner.

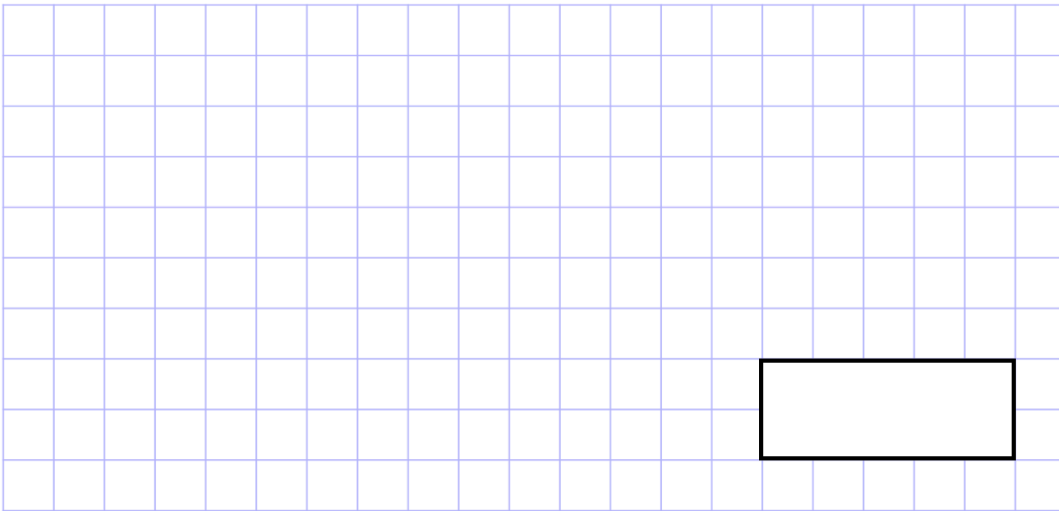
12.

20% of 1,600

A 20x10 grid with a rectangular box for the answer, spanning 5 units wide and 2 units high, located in the bottom right corner.

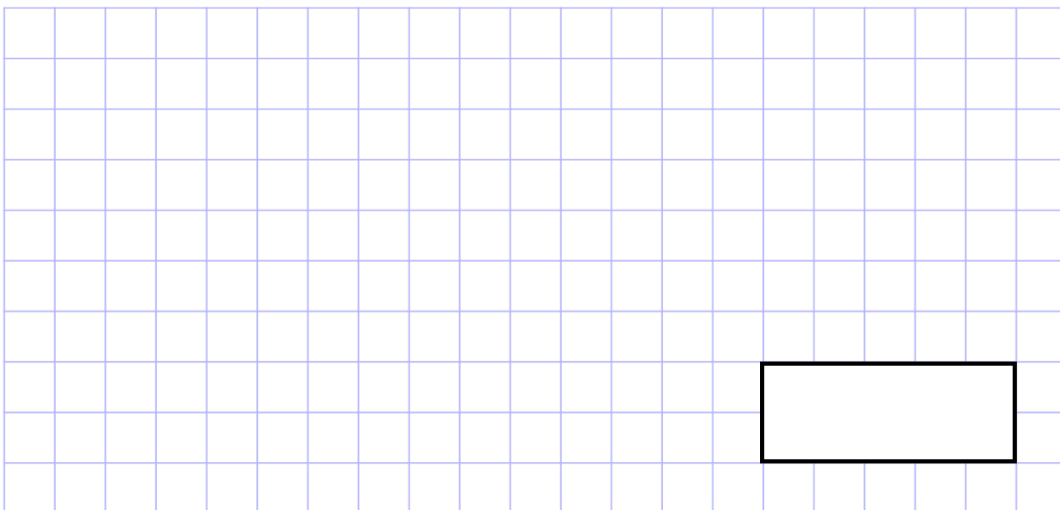
13.

60% of 460



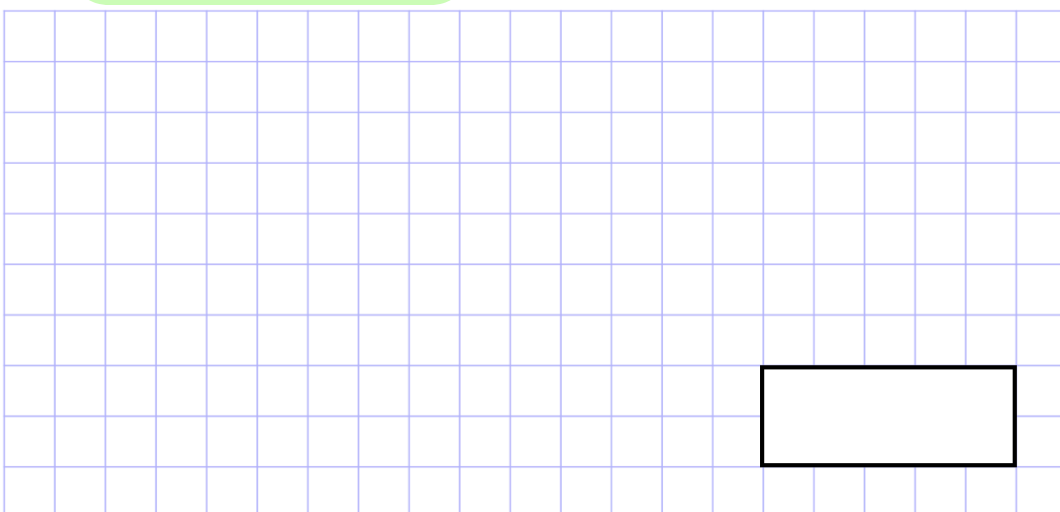
14.

3% of 500



15.

15% of 4,000



16.

35% of 820

A 20x10 grid with a rectangular box for the answer, spanning 4 units wide and 2 units high, located in the bottom right corner.

17.

15%  $\times$  660

A 20x10 grid with a rectangular box for the answer, spanning 4 units wide and 2 units high, located in the bottom right corner.

18.

4%  $\times$  6,000

A 20x10 grid with a rectangular box for the answer, spanning 4 units wide and 2 units high, located in the bottom right corner.

19. A school has 152 students

50% of the students are boys.

How many of students are boys?

---

20. There are 800 fans at a rugby match between Carrick and Larne.



20% of the fans support Carrick.  
The rest of the fans support Larne.

How many fans support Carrick?

How many fans support Larne?



21. Hannah has £700

She spends **15%** of her money on a new guitar.



How much does Hannah spend on her guitar?

£

---

22. An adult ticket for a museum is £20.00

A child ticket costs 60% of the price of an adult ticket.



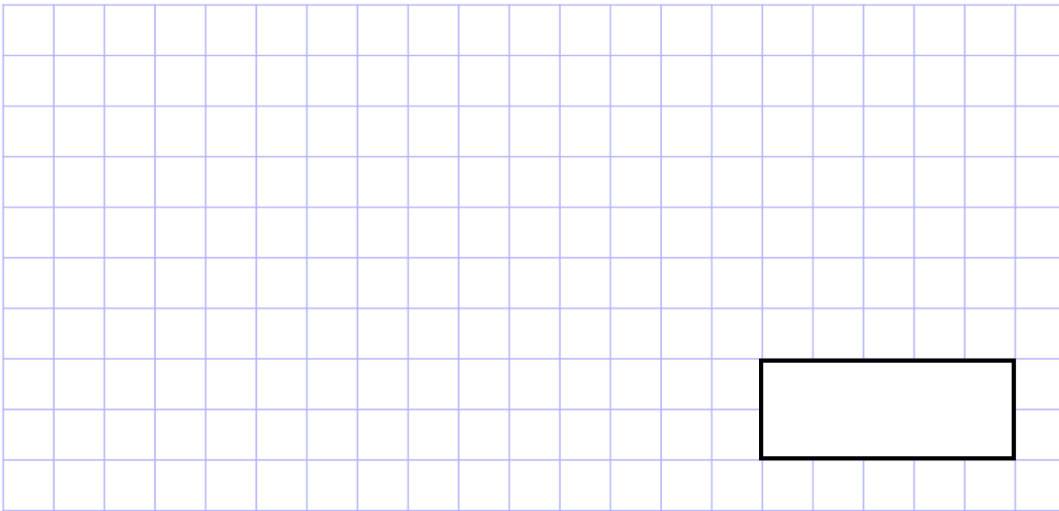
How much does a child ticket cost?

£



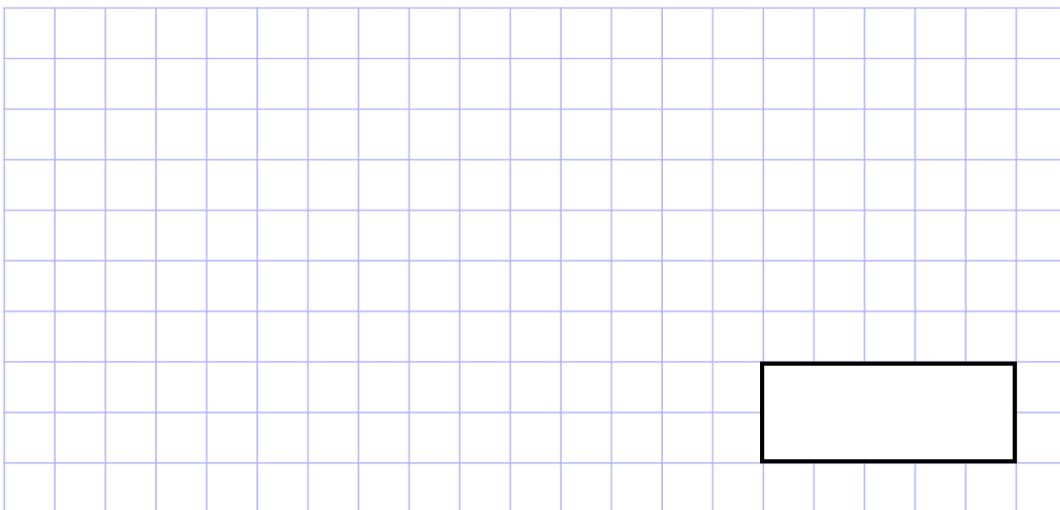
25.

95% of 520



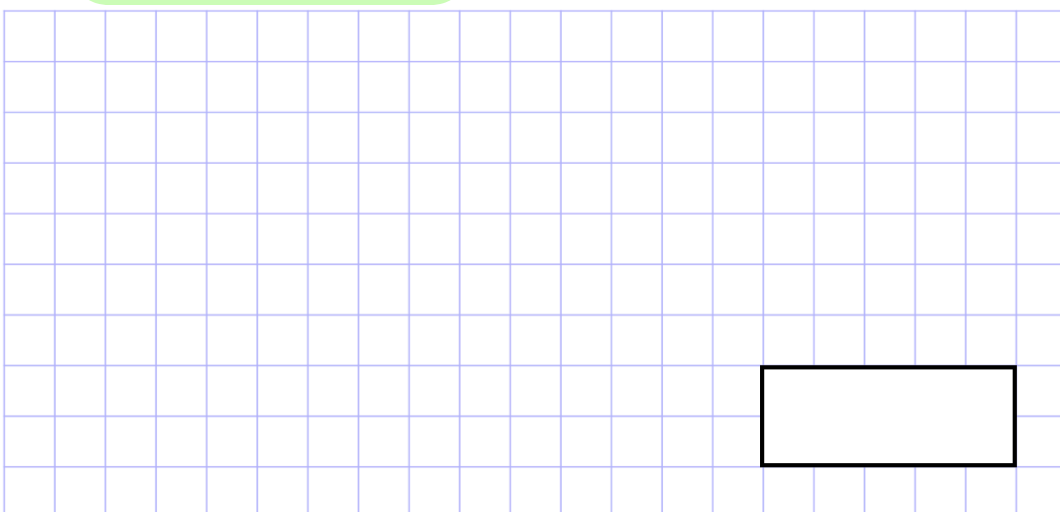
26.

99% of 400



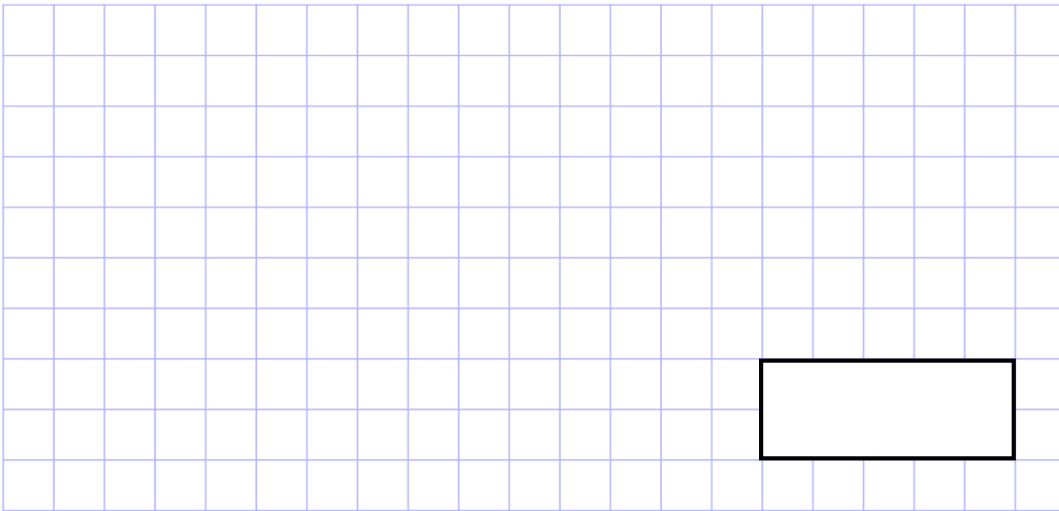
27.

80% of 29,000



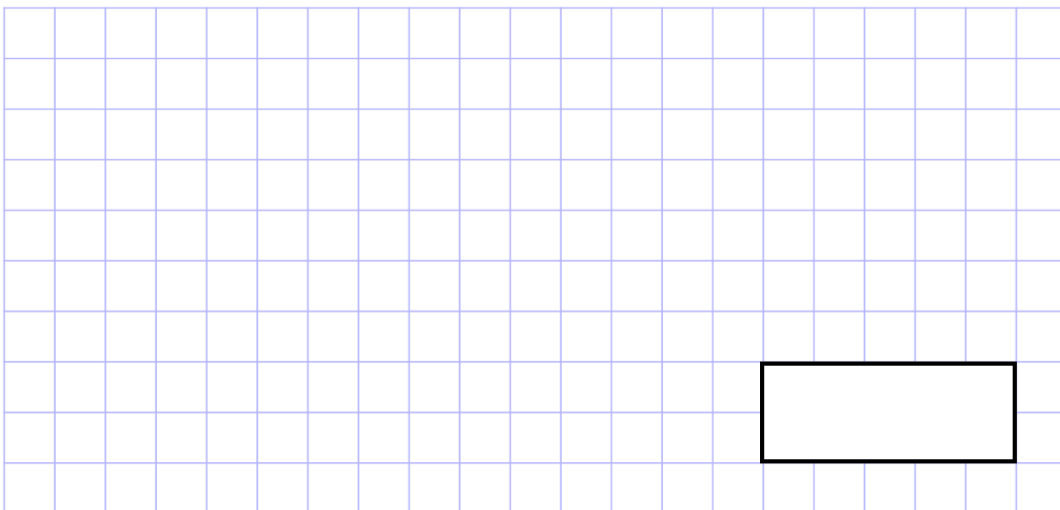
28.

$$65\% \times 3,600$$



29.

$$28\% \text{ of } 750$$



30.

$$63\% \text{ of } 80$$

