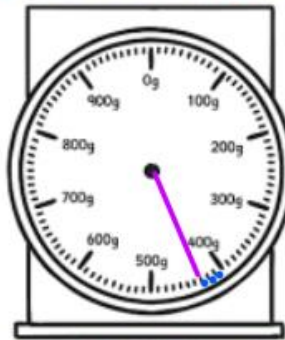


Guided Practice:

(a)



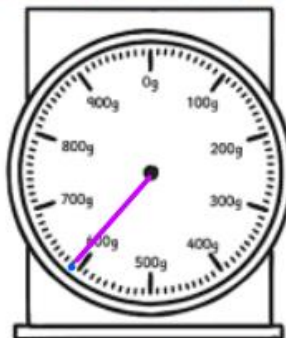
The mass of the bag of crisps is about g.



(b)



The mass of the bowl is about g.



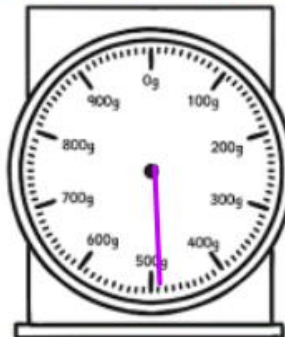
Remember:

Each line past the 100 is 10g. You must count in 10s!

(c)



The mass of the bag of crisps and a mushroom is about g.



(d)



The mass of 2 tomatoes is about g.



Remember:

Each line past the 100 is 10g. You must count in 10s!