



## Comparing Amounts of Money



1 Write each amount of money in £, then compare the two amounts.

(a)

	
£0.70	£0.60



£ **0.70** is more than £ **0.60** .

(b)

	
<b>£1.50</b>	<b>£1.55</b>

£ **1.50** is less than £ **1.55** .

(c)

	
<b>£2.85</b>	<b>£3.05</b>

£ **3.05** is more than £ **2.85** .

