
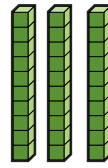


- 1) Find 10 more and 10 less than the number shown.

Use base ten blocks to help you.

10 more = \_\_\_\_\_

10 less = \_\_\_\_\_



- 2) Fill in the table below. The first row has been done for you.


| Number | 1 more | 10 more | 100 more |
|--------|--------|---------|----------|
| 146    | 147    | 156     | 246      |
| 573    |        |         |          |
|        |        |         | 912      |
| 604    |        |         |          |
|        | 476    |         |          |
|        |        | 803     |          |

- 1) True or false?

| Statement                               | True or False? |
|---|----------------|
| a) 10 more than 462 > 100 less than 556 |                |
| b) 1 less than 750 < 100 more than 634  |                |
| c) 100 less than 643 = 10 more than 533 |                |



- 2) Kareem starts with a number.  
He puts it through the function machines.



He ends up with 676.

- a) What number did he start with? \_\_\_\_\_
- b) If Kareem had started off with 676, what number would he have ended up with? \_\_\_\_\_