

Addition and Subtraction Word Problems

- 1** There are 8 round buttons.
There are 5 square buttons.
How many buttons are there altogether?



- 2** A monkey has 7 bananas.
The zookeeper gives it 12 more bananas.
How many bananas does the monkey have now?



- 3** 11 basketballs are in a basket.
9 footballs are in the same basket.
How many balls are there in the basket?

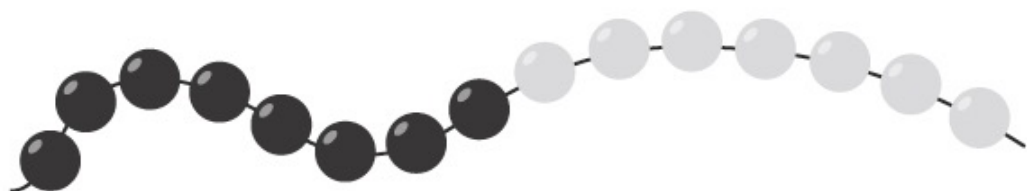


4

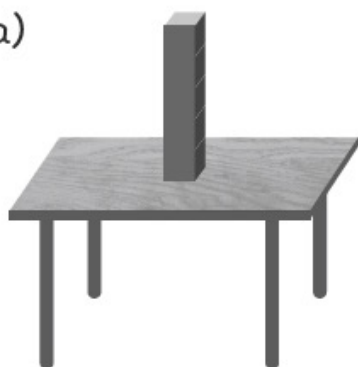
There are 15 beads in a string of beads.

8 of the beads are black and the rest are white.

How many white beads are there in the string of beads?



(a)



How many cubes need to be added to make a stack of 9 cubes?

$$5 + \square = 9$$

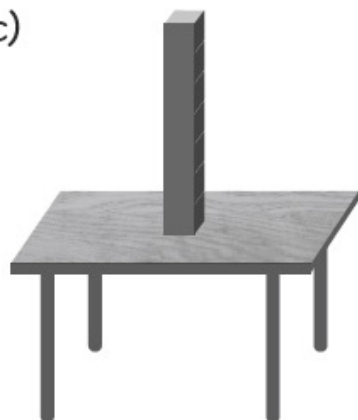
(b)



How many cubes need to be added to make a stack of 7 cubes?

$$2 + \square = 7$$

(c)



How many cubes need to be taken away to make a stack of 3 cubes?

$$7 - \square = 3$$