

22/4/21

Day 4

In Focus



This is my money.



How much money do I have?



What should I
count first?



Let's Learn

1



has £7 and 75p.

£5, £6, £7

50p, 70p, 75p



We count the pounds first and
move onto the pence.

22/4/21

MNP Chapter 8 Lesson 1

Can add and subtract amounts of money



Do the following work in your virtual school book or on paper.

2 How much money is this?



£ , £ ,
£ , £

p, p, p

The amount of money is .



22/4/21

MNP Chapter 8 Lesson 1

Can add and subtract amounts of money



Do the following work in your virtual school book or on paper.

2 How much money is this?



£ 5 , £ 6 ,
£ 7 , £ 8

50 p, 70 p, 80 p

The amount of money is £8 and

80p





Guided Practice

How much money does each child have?

(a)  Sam has

(b)  Emma has

(c)  Holly has

(d)  Ravi has

(e)  Lulu has

Guided Practice

How much money does each child have?

(a)  



Sam has **£40**.

(b)  

Emma has **60p**.

(c)  

Holly has **£26**.

(d)  

Ravi has **£1**.

(e)  

Lulu has **£25**.

(f)




Amira has .

(g)



Ruby has .

(h)



Elliott has .

(f)




Amira has £5.78.

(g)



Ruby has £63.50

(h)



Elliott has £55.52

Naming Amounts of Money

- 1 Holly goes to the shop.
How much does each item, or group of items, cost?

(a)  

The pears cost .

(b)  

The cabbage costs .

(c)  

The bottle of squash costs .

2 Ruby, Elliott and Lulu saved some money.
How much did each of them save?

(a)



Ruby saved



(b)



Elliott saved



(c)



Lulu saved



Naming Amounts of Money

- 1 Holly goes to the shop.
How much does each item, or group of items, cost?

(a)  

The pears cost .

(b)  

The cabbage costs .

(c)  

The bottle of squash costs .

2 Ruby, Elliott and Lulu saved some money.
How much did each of them save?

(a)



Ruby saved

£26



(b)



Elliott saved

£53



(c)



Lulu saved

£72.50



Going Deeper



Show me 3 different ways that you could make the same amount of money.