

Hours in a day

1 Write the times of day in order of when they happen.

afternoon

morning

midnight

midday

evening

2 Match the description to the correct number.

months in a year

5

days in a week

168

hours in a day

31

days in a non-leap year

7

hours in a week

24

days in a school week

365

maximum number of
days in a month

12

3 Fill in the missing numbers.

a) 1 day = 24 hours

$$\square \text{ days} = 48 \text{ hours}$$

$$4 \text{ days} = \square \text{ hours}$$

$$\square \text{ days} = 960 \text{ hours}$$

$$41 \text{ days} = \square \text{ hours}$$

b) 1 week = 7 days


$$2 \text{ weeks} = \square \text{ days}$$

$$\square \text{ weeks} = 21 \text{ days}$$

$$60 \text{ weeks} = \square \text{ days}$$


$$63 \text{ weeks} = \square \text{ days}$$

4 Aisha arrives home at 11 o'clock.



Dora

It must be
nearly lunchtime.



Amir

It must be
dark outside.

Who do you agree with? _____

Explain your answer.

5 There are 5 days in a school week.

a) What is the difference in the number of days in 4 **school weeks** compared to 4 whole weeks?

b) There are 7 hours in a school day.


How many more hours are there in 5 full days than 5 school days?

Talk to a partner about how you worked out your answers.



6

Kim and Dexter are working out how many more hours are in the month of August than September.



I can work out how many hours are in August in total, how many hours are in September in total and subtract one from the other.

Kim thinks there is an easier way of working it out.

What might Kim's method be?

Talk about it with a partner.





- 7 Brett knows that there are 24 hours in one day, 48 hours in two days and 72 hours in three days.

Use these facts to work out how many hours there are in each month.

April

January

February of a non-leap year

February of a leap year

8

There are more days in October than September.
Therefore, there are more school days in October
than September.

Is this always, sometimes or never true?

How do you know?



9

Esther goes to school for 5 hours each day.

There are no school holidays in the month of March.

How many hours could Esther spend at school in March?

Compare answers with a partner.

